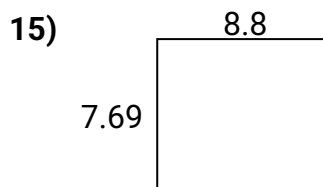
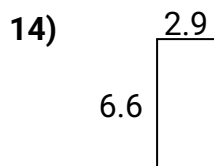
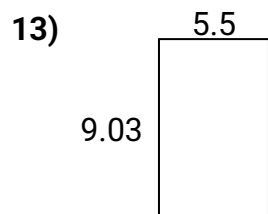
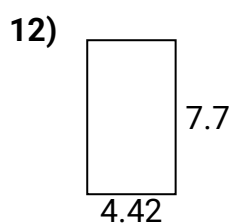
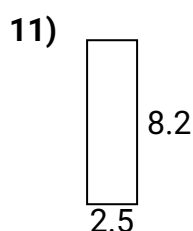
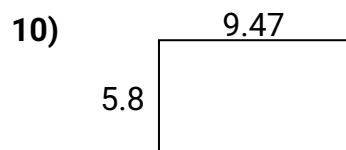
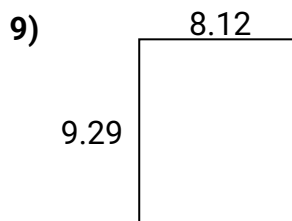
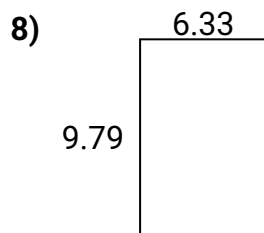
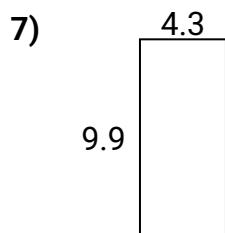
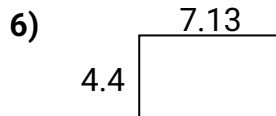
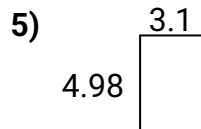
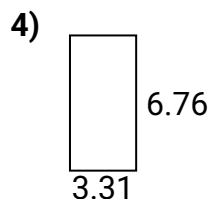
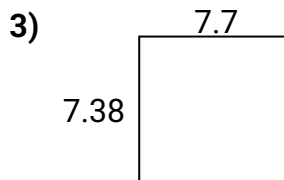
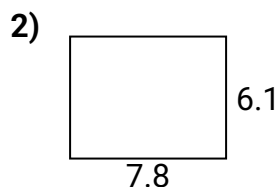
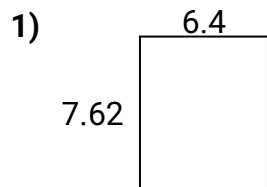




Trouver le périmètre et la zone avec des décimales Nom: _____

Trouvez le périmètre et l'aire de chaque figure. Répondez au dixième près.



Réponses

1. _____
2. _____
3. _____
4. _____
5. _____
6. _____
7. _____
8. _____
9. _____
10. _____
11. _____
12. _____
13. _____
14. _____
15. _____

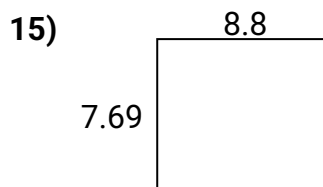
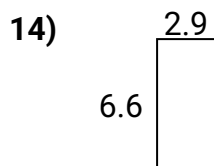
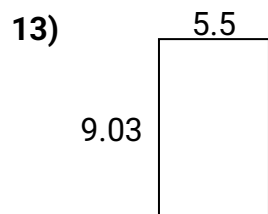
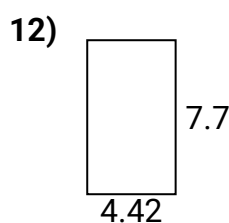
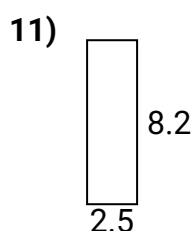
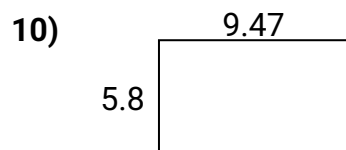
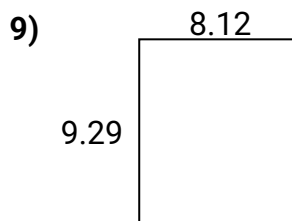
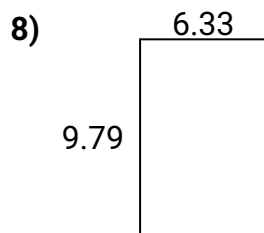
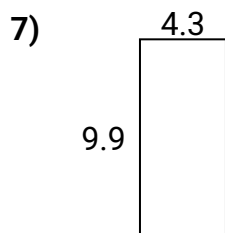
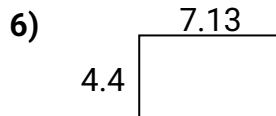
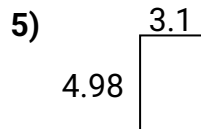
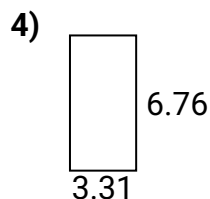
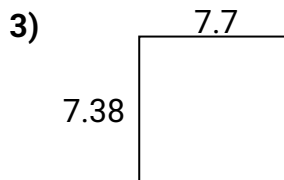
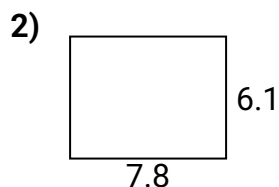
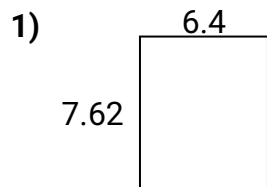


Trouver le périmètre et la zone avec des décimales

Nom:

Clé

Trouvez le périmètre et l'aire de chaque figure. Répondez au dixième près.



Réponses

| | | |
|-----|-------------|-------------|
| 1. | <u>48,8</u> | <u>28,0</u> |
| 2. | <u>47,6</u> | <u>27,8</u> |
| 3. | <u>56,8</u> | <u>30,2</u> |
| 4. | <u>22,4</u> | <u>20,1</u> |
| 5. | <u>15,4</u> | <u>16,2</u> |
| 6. | <u>31,4</u> | <u>23,1</u> |
| 7. | <u>42,6</u> | <u>28,4</u> |
| 8. | <u>62,0</u> | <u>32,2</u> |
| 9. | <u>75,4</u> | <u>34,8</u> |
| 10. | <u>54,9</u> | <u>30,5</u> |
| 11. | <u>20,5</u> | <u>21,4</u> |
| 12. | <u>34,0</u> | <u>24,2</u> |
| 13. | <u>49,7</u> | <u>29,1</u> |
| 14. | <u>19,1</u> | <u>19,0</u> |
| 15. | <u>67,7</u> | <u>33,0</u> |