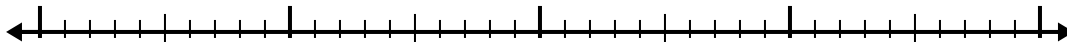




Utilisez la droite numérique pour résoudre chaque problème.

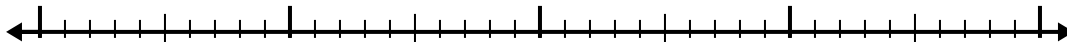
## Réponses

1)  $1.7 + 1.9 =$



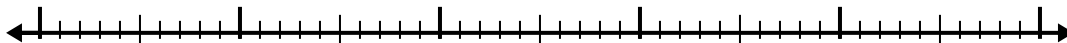
1. \_\_\_\_\_

2)  $2.8 + 2.5 =$



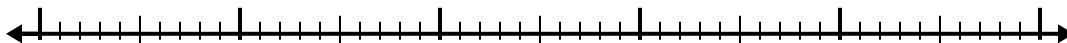
2. \_\_\_\_\_

3)  $7.9 + 3.2 =$



3. \_\_\_\_\_

4)  $8.4 + 2.4 =$



4. \_\_\_\_\_

5)  $2.4 + 3.2 =$




5. \_\_\_\_\_

6)  $8.3 + 1.8 =$




6. \_\_\_\_\_

7)  $2.1 + 2.5 =$




7. \_\_\_\_\_

8)  $8.5 + 1.4 =$




8. \_\_\_\_\_

9)  $4.8 + 1.4 =$



9. \_\_\_\_\_

10)  $5.9 + 1.7 =$



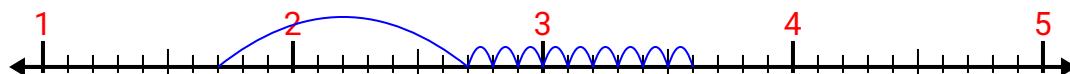
10. \_\_\_\_\_



Utilisez la droite numérique pour résoudre chaque problème.

## Réponses


1)  $1.7 + 1.9 =$

1. 3,6

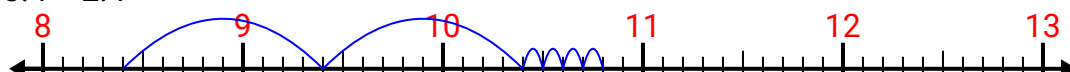
2)  $2.8 + 2.5 =$

2. 5,3

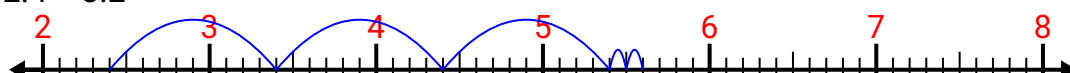
3)  $7.9 + 3.2 =$

3. 11,1

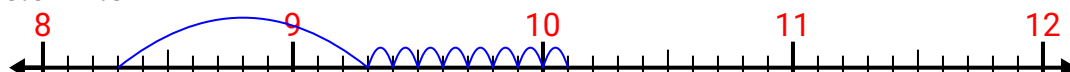
4)  $8.4 + 2.4 =$

4. 10,8

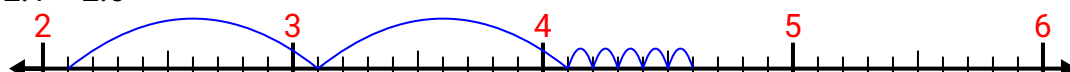
5)  $2.4 + 3.2 =$

5. 5,6


6)  $8.3 + 1.8 =$

6. 10,1

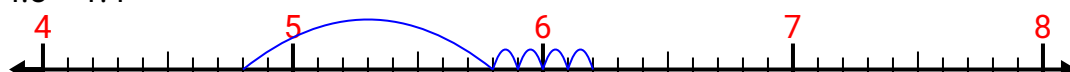
7)  $2.1 + 2.5 =$

7. 4,6

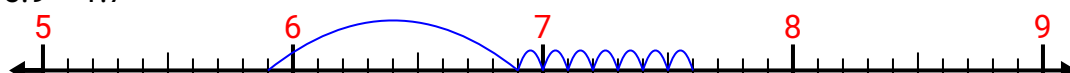
8)  $8.5 + 1.4 =$

8. 9,9

9)  $4.8 + 1.4 =$

9. 6,2

10)  $5.9 + 1.7 =$

10. 7,6