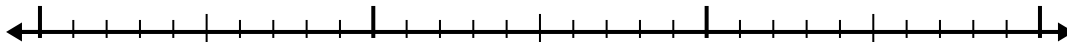




Utilisez la droite numérique pour résoudre chaque problème.


## Réponses

1)  $2,2 - 1,1 =$



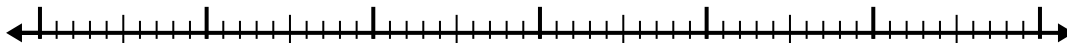
1. \_\_\_\_\_

2)  $7,8 - 3,6 =$



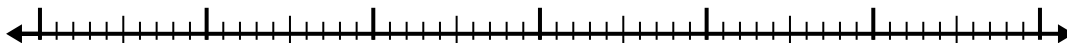
2. \_\_\_\_\_

3)  $5,8 - 3,6 =$



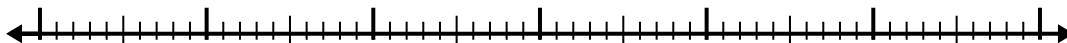
3. \_\_\_\_\_

4)  $11,1 - 3,9 =$




4. \_\_\_\_\_

5)  $12,3 - 3,6 =$




5. \_\_\_\_\_

6)  $5,3 - 2,5 =$




6. \_\_\_\_\_

7)  $4,9 - 3,2 =$




7. \_\_\_\_\_

8)  $6,6 - 1,6 =$




8. \_\_\_\_\_

9)  $4,8 - 1,4 =$



9. \_\_\_\_\_

10)  $5,1 - 2,6 =$



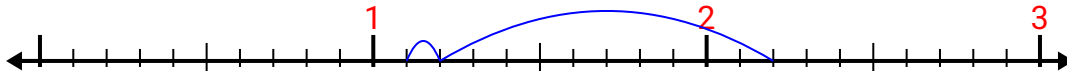
10. \_\_\_\_\_



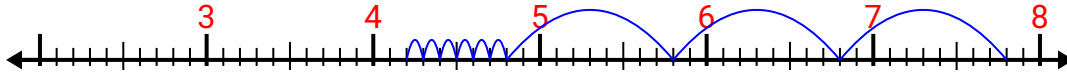
Utilisez la droite numérique pour résoudre chaque problème.

## Réponses

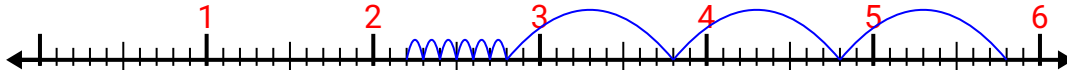
1)  $2,2 - 1,1 =$



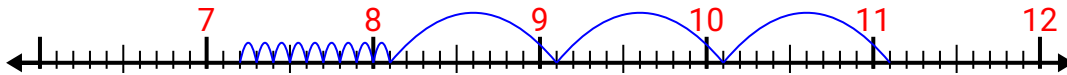
2)  $7,8 - 3,6 =$



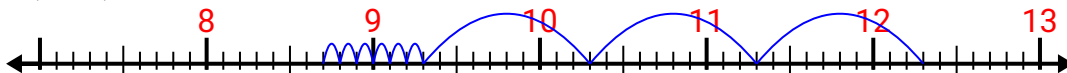
3)  $5,8 - 3,6 =$



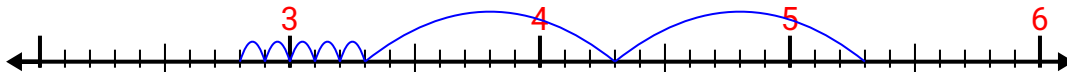
4)  $11,1 - 3,9 =$



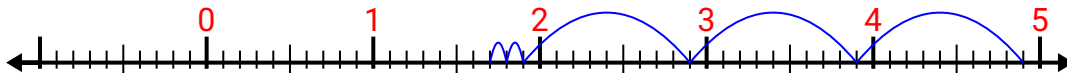
5)  $12,3 - 3,6 =$



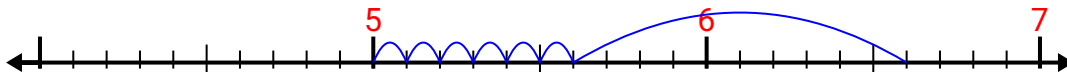
6)  $5,3 - 2,5 =$



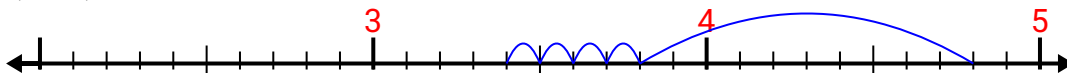
7)  $4,9 - 3,2 =$



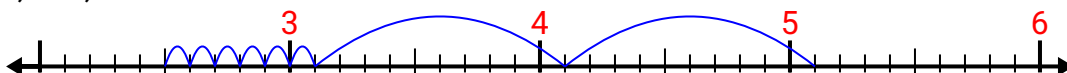
8)  $6,6 - 1,6 =$



9)  $4,8 - 1,4 =$



10)  $5,1 - 2,6 =$

1. 1,12. 4,23. 2,24. 7,25. 8,76. 2,87. 1,78. 59. 3,410. 2,5