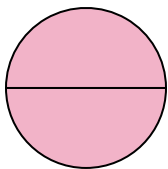




Déterminez quelle lettre représente le mieux la partie colorée de la figure.


**Réponses**

1)



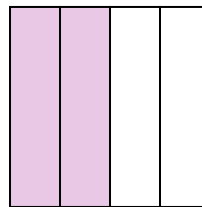
- A. two-halves  
B. one-quarter  
C. two-quarters

2)



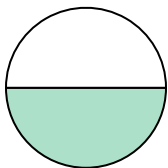
- A. one-half  
B. three-fourths  
C. two-halves

3)



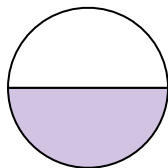
- A. two-fourths  
B. one-fourth  
C. three-fourths

4)



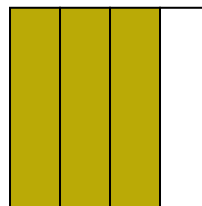
- A. two-fourths  
B. three-fourths  
C. one-half

5)



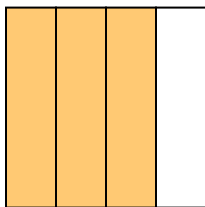
- A. three-fourths  
B. one-half  
C. two-quarters

6)



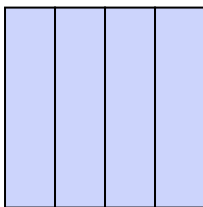
- A. one-fourth  
B. two-fourths  
C. three-fourths

7)



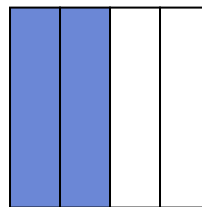
- A. two-fourths  
B. four-quarters  
C. three-quarters

8)



- A. two-quarters  
B. one-half  
C. four-quarters

9)



- A. two-halves  
B. two-fourths  
C. one-fourth

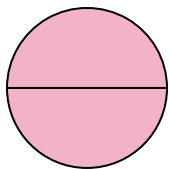
1. \_\_\_\_\_  
2. \_\_\_\_\_  
3. \_\_\_\_\_  
4. \_\_\_\_\_  
5. \_\_\_\_\_  
6. \_\_\_\_\_  
7. \_\_\_\_\_  
8. \_\_\_\_\_  
9. \_\_\_\_\_



Déterminez quelle lettre représente le mieux la partie colorée de la figure.


**Réponses**

1)



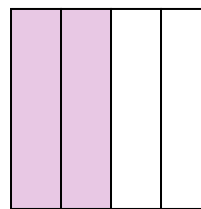
- A. two-halves  
B. one-quarter  
C. two-quarters

2)



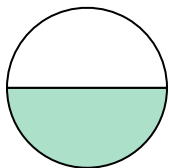
- A. one-half  
B. three-fourths  
C. two-halves

3)



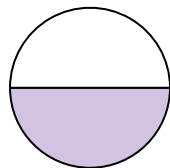
- A. two-fourths  
B. one-fourth  
C. three-fourths

4)



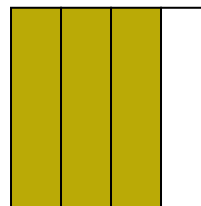
- A. two-fourths  
B. three-fourths  
C. one-half

5)



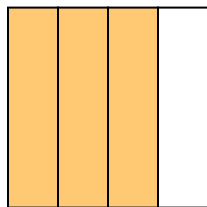
- A. three-fourths  
B. one-half  
C. two-quarters

6)



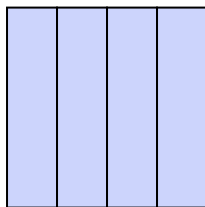
- A. one-fourth  
B. two-fourths  
C. three-fourths

7)



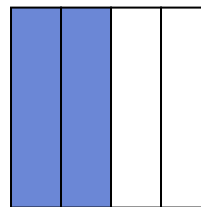
- A. two-fourths  
B. four-quarters  
C. three-quarters

8)



- A. two-quarters  
B. one-half  
C. four-quarters

9)



- A. two-halves  
B. two-fourths  
C. one-fourth

1. **A**

2. **C**

3. **A**

4. **C**

5. **B**

6. **C**

7. **C**

8. **C**

9. **B**