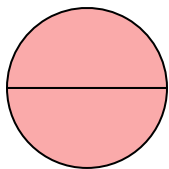




Déterminez quelle lettre représente le mieux la partie colorée de la figure.

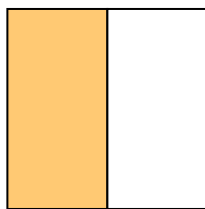
Réponses

1)



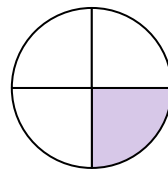
- A. one-half
B. two-quarters
C. two-halves

2)



- A. two-quarters
B. three-fourths
C. one-half

3)



- A. two-quarters
B. one-quarter
C. one-half

1. _____

2. _____

3. _____

4. _____

5. _____

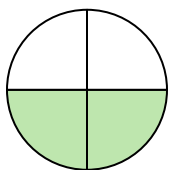
6. _____

7. _____

8. _____


9. _____

4)



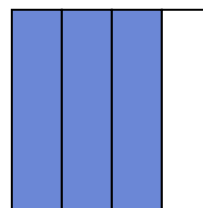
- A. three-fourths
B. two-fourths
C. one-half

5)



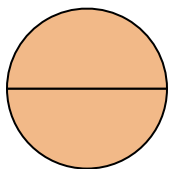
- A. one-half
B. three-quarters
C. one-fourth

6)



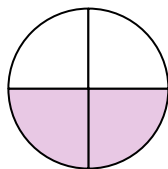
- A. one-half
B. three-fourths
C. four-quarters

7)



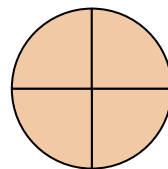
- A. two-quarters
B. two-halves
C. one-half

8)



- A. two-fourths
B. one-half
C. three-fourths

9)



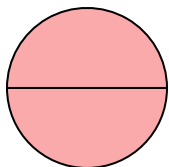
- A. three-quarters
B. two-halves
C. three-fourths



Déterminez quelle lettre représente le mieux la partie colorée de la figure.

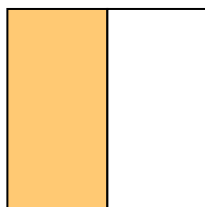
Réponses

1)



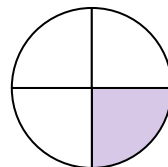
- A. one-half
B. two-quarters
C. two-halves

2)



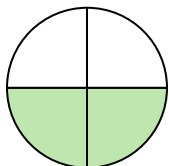
- A. two-quarters
B. three-fourths
C. one-half

3)




- A. two-quarters
B. one-quarter
C. one-half

4)



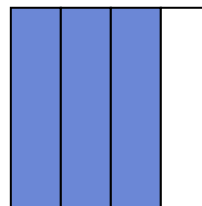
- A. three-fourths
B. two-fourths
C. one-half

5)



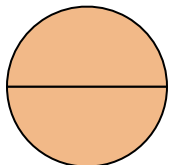
- A. one-half
B. three-quarters
C. one-fourth

6)



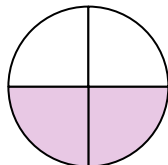
- A. one-half
B. three-fourths
C. four-quarters

7)



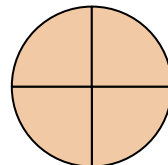
- A. two-quarters
B. two-halves
C. one-half

8)



- A. two-fourths
B. one-half
C. three-fourths

9)



- A. three-quarters
B. two-halves
C. three-fourths

1. **C**2. **C**3. **B**4. **B**5. **A**6. **B**7. **B**8. **A**9. **C**