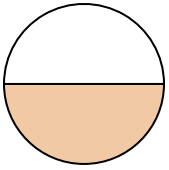




Déterminez quelle lettre représente le mieux la partie colorée de la figure.

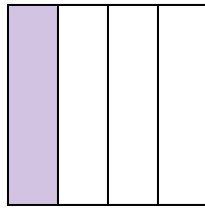
Réponses

1)



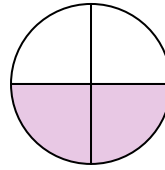
- A. three-fourths
B. one-half
C. two-fourths

2)



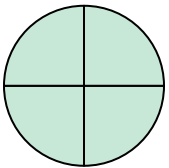
- A. one-quarter
B. three-quarters
C. two-halves

3)



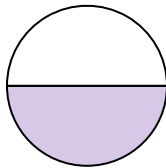
- A. one-fourth
B. one-half
C. two-quarters

4)




- A. two-halves
B. three-fourths
C. three-fourths

5)




- A. one-half
B. two-quarters
C. three-fourths

6)



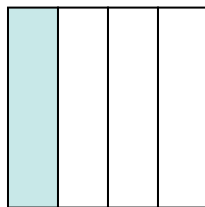
- A. two-halves
B. one-fourth
C. two-quarters

7)



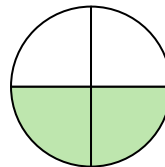
- A. one-half
B. two-halves
C. one-fourth

8)



- A. one-quarter
B. three-quarters
C. two-halves

9)



- A. two-fourths
B. one-quarter
C. one-half

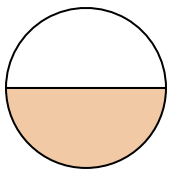
1. _____
2. _____
3. _____
4. _____
5. _____
6. _____
7. _____
8. _____
9. _____



Déterminez quelle lettre représente le mieux la partie colorée de la figure.


Réponses

1)



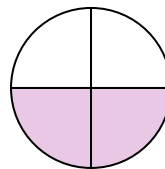
- A. three-fourths
B. one-half
C. two-fourths

2)



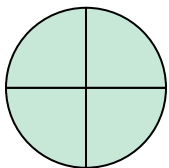
- A. one-quarter
B. three-quarters
C. two-halves

3)



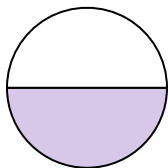
- A. one-fourth
B. one-half
C. two-quarters

4)




- A. two-halves
B. three-fourths
C. three-fourths

5)




- A. one-half
B. two-quarters
C. three-fourths

6)



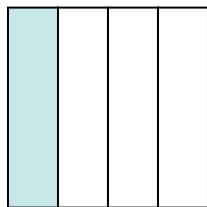
- A. two-halves
B. one-fourth
C. two-quarters

7)



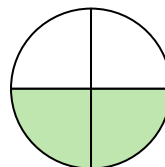
- A. one-half
B. two-halves
C. one-fourth

8)



- A. one-quarter
B. three-quarters
C. two-halves

9)



- A. two-fourths
B. one-quarter
C. one-half

1. **B**

2. **A**

3. **C**

4. **B**

5. **A**

6. **A**

7. **B**

8. **A**

9. **A**