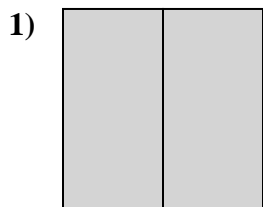


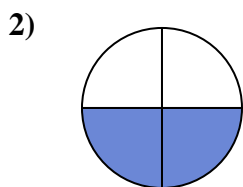


Déterminez quelle lettre représente le mieux la partie colorée de la figure.

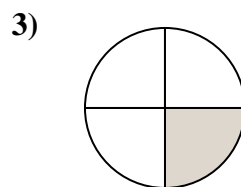
Réponses



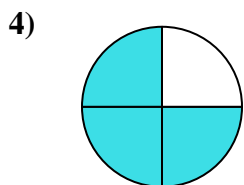
- A. two-quarters
B. two-halves
C. three-fourths



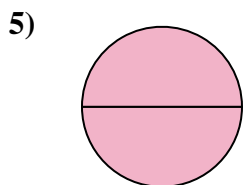
- A. three-fourths
B. three-fourths
C. two-fourths



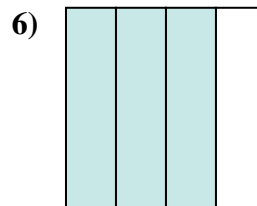
- A. two-quarters
B. one-fourth
C. two-halves



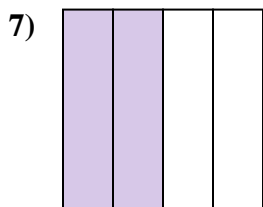
- A. two-fourths
B. three-fourths
C. two-halves



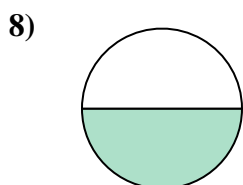
- A. one-fourth
B. three-fourths
C. two-halves



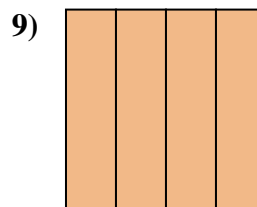
- A. one-fourth
B. three-fourths
C. two-halves



- A. one-quarter
B. three-fourths
C. two-quarters



- A. two-halves
B. one-half
C. two-fourths



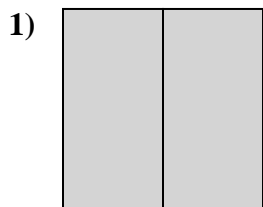
- A. four-quarters
B. three-quarters
C. one-half

1. _____
2. _____
3. _____
4. _____
5. _____
6. _____
7. _____
8. _____
9. _____

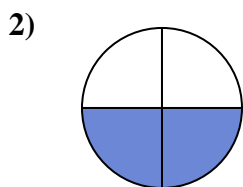


Déterminez quelle lettre représente le mieux la partie colorée de la figure.

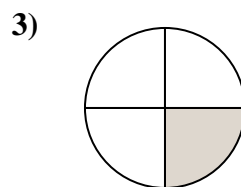
Réponses



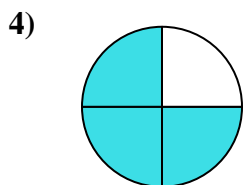
- A. two-quarters
B. two-halves
C. three-fourths



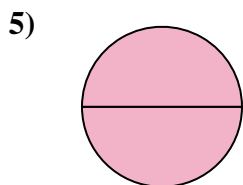
- A. three-fourths
B. three-fourths
C. two-fourths



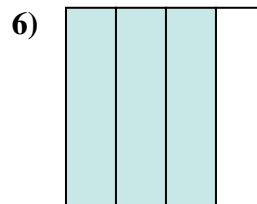
- A. two-quarters
B. one-fourth
C. two-halves



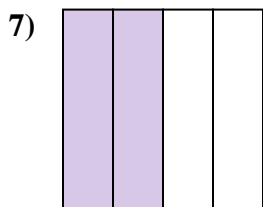
- A. two-fourths
B. three-fourths
C. two-halves



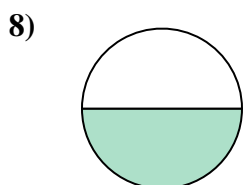
- A. one-fourth
B. three-fourths
C. two-halves



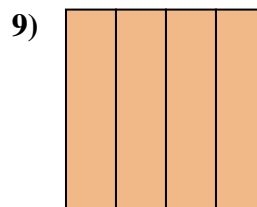
- A. one-fourth
B. three-fourths
C. two-halves



- A. one-quarter
B. three-fourths
C. two-quarters



- A. two-halves
B. one-half
C. two-fourths



- A. four-quarters
B. three-quarters
C. one-half

1. **B**
2. **C**
3. **B**
4. **B**
5. **C**
6. **B**
7. **C**
8. **B**
9. **A**