


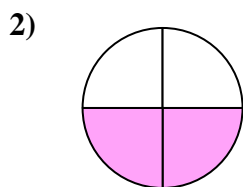


Déterminez quelle lettre représente le mieux la partie colorée de la figure.

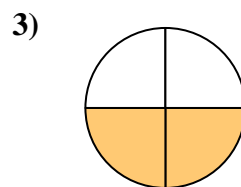
Réponses




- A. two-halves
B. one-fourth
C. one-half



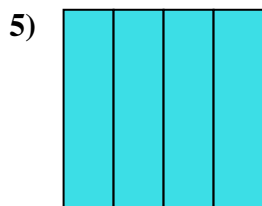
- A. two-fourths
B. two-halves
C. one-half



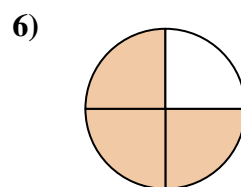
- A. two-quarters
B. two-halves
C. one-quarter



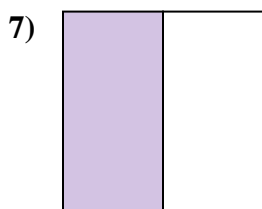
- A. three-quarters
B. one-half
C. three-fourths



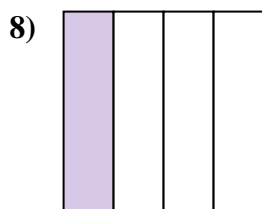
- A. two-quarters
B. four-quarters
C. two-halves



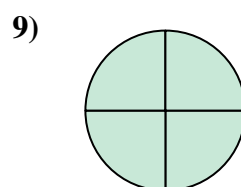
- A. three-quarters
B. four-quarters
C. one-quarter



- A. three-quarters
B. three-fourths
C. one-half



- A. two-fourths
B. three-quarters
C. one-fourth




- A. three-fourths
B. two-halves
C. three-fourths

1. _____
2. _____
3. _____
4. _____
5. _____
6. _____
7. _____
8. _____
9. _____

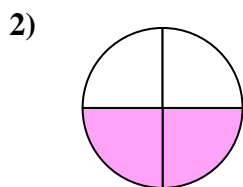


Déterminez quelle lettre représente le mieux la partie colorée de la figure.

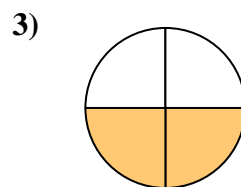
Réponses




- A. two-halves
B. one-fourth
C. one-half



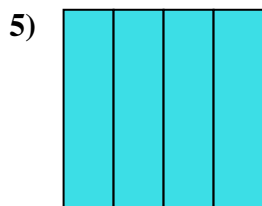
- A. two-fourths
B. two-halves
C. one-half



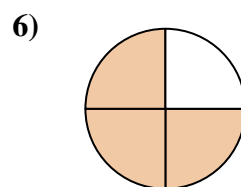
- A. two-quarters
B. two-halves
C. one-quarter



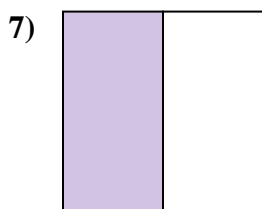
- A. three-quarters
B. one-half
C. three-fourths



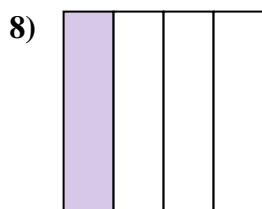
- A. two-quarters
B. four-quarters
C. two-halves



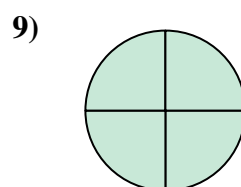
- A. three-quarters
B. four-quarters
C. one-quarter



- A. three-quarters
B. three-fourths
C. one-half



- A. two-fourths
B. three-quarters
C. one-fourth



- A. three-fourths
B. two-halves
C. three-fourths

1. **A**

2. **A**

3. **A**

4. **B**

5. **B**

6. **A**

7. **C**

8. **C**

9. **C**