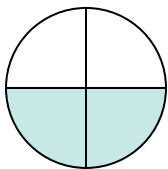




Déterminez quelle lettre représente le mieux la partie colorée de la figure.

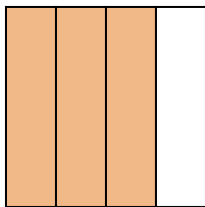
Réponses

1)



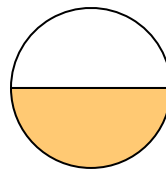
- A. one-quarter
B. two-fourths
C. one-half

2)




- A. one-fourth
B. two-fourths
C. three-quarters

3)



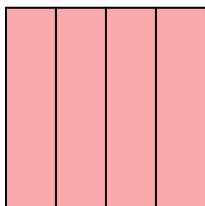
- A. one-fourth
B. one-half
C. two-halves

4)



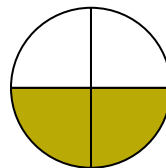
- A. one-half
B. three-fourths
C. one-fourth

5)



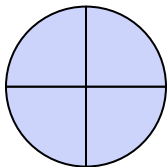
- A. four-quarters
B. two-halves
C. one-half

6)



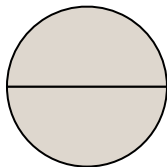
- A. two-quarters
B. three-quarters
C. one-half

7)



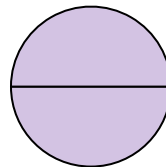
- A. two-halves
B. one-half
C. three-fourths

8)



- A. two-halves
B. three-quarters
C. three-fourths

9)



- A. two-halves
B. two-quarters
C. four-quarters

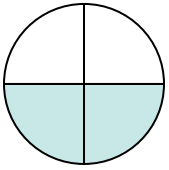
1. _____
2. _____
3. _____
4. _____
5. _____
6. _____
7. _____
8. _____
9. _____



Déterminez quelle lettre représente le mieux la partie colorée de la figure.

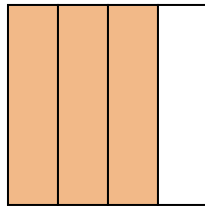
Réponses

1)



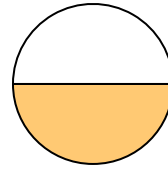
- A. one-quarter
B. two-fourths
C. one-half

2)



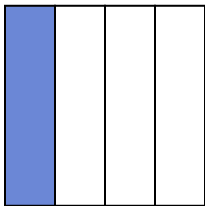
- A. one-fourth
B. two-fourths
C. three-quarters

3)



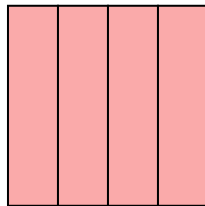
- A. one-fourth
B. one-half
C. two-halves

4)



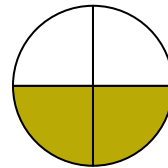
- A. one-half
B. three-fourths
C. one-fourth

5)



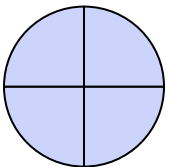
- A. four-quarters
B. two-halves
C. one-half

6)



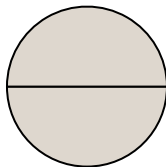
- A. two-quarters
B. three-quarters
C. one-half

7)



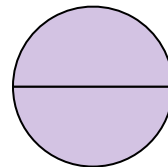
- A. two-halves
B. one-half
C. three-fourths

8)



- A. two-halves
B. three-quarters
C. three-fourths

9)



- A. two-halves
B. two-quarters
C. four-quarters

1. **B**
2. **C**
3. **B**
4. **C**
5. **A**
6. **A**
7. **C**
8. **A**
9. **A**