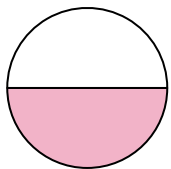




Déterminez quelle lettre représente le mieux la partie colorée de la figure.


Réponses

1)



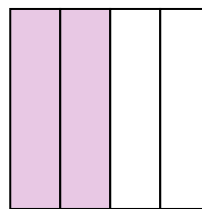
- A. one-half
B. two-halves
C. one-fourth

2)



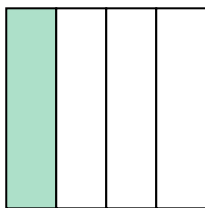
- A. three-fourths
B. one-quarter
C. two-halves

3)



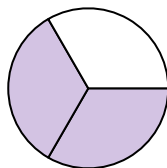
- A. two-quarters
B. one-half
C. three-fourths

4)



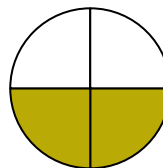
- A. three-fourths
B. one-fourth
C. two-halves

5)



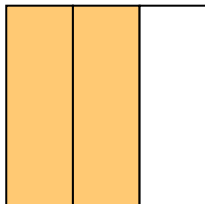
- A. three-fourths
B. two-thirds
C. two-quarters

6)



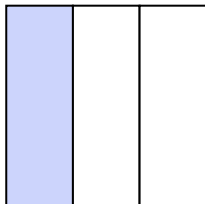
- A. three-fourths
B. two-fourths
C. three-fourths

7)



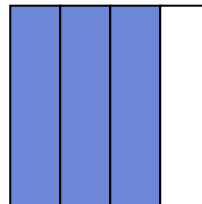
- A. one-quarter
B. four-quarters
C. two-thirds

8)




- A. three-fourths
B. one-third
C. two-halves

9)



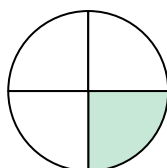
- A. three-fourths
B. three-fourths
C. two-quarters

10)




- A. two-halves
B. one-quarter
C. one-half

11)



- A. three-fourths
B. one-half
C. one-quarter

12)



- A. three-thirds
B. two-halves
C. one-quarter

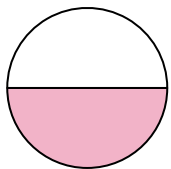
1. _____
2. _____
3. _____
4. _____
5. _____
6. _____
7. _____
8. _____
9. _____
10. _____
11. _____
12. _____



Déterminez quelle lettre représente le mieux la partie colorée de la figure.


Réponses

1)



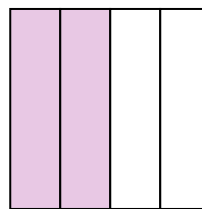
- A. one-half
B. two-halves
C. one-fourth

2)



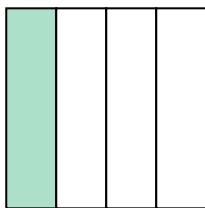
- A. three-fourths
B. one-quarter
C. two-halves

3)



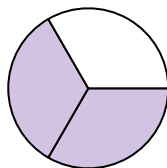
- A. two-quarters
B. one-half
C. three-fourths

4)



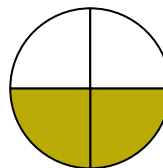
- A. three-fourths
B. one-fourth
C. two-halves

5)



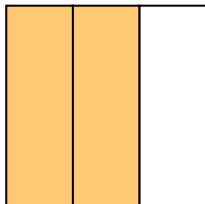
- A. three-fourths
B. two-thirds
C. two-quarters

6)



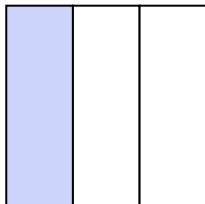
- A. three-fourths
B. two-fourths
C. three-fourths

7)



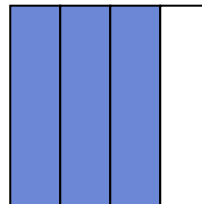
- A. one-quarter
B. four-quarters
C. two-thirds

8)




- A. three-fourths
B. one-third
C. two-halves

9)



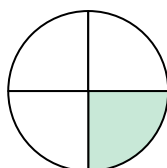
- A. three-fourths
B. three-fourths
C. two-quarters

10)




- A. two-halves
B. one-quarter
C. one-half

11)



- A. three-fourths
B. one-half
C. one-quarter

12)



- A. three-thirds
B. two-halves
C. one-quarter

1. **A**
2. **C**
3. **A**
4. **B**
5. **B**
6. **B**
7. **C**
8. **B**
9. **B**
10. **C**
11. **C**
12. **A**