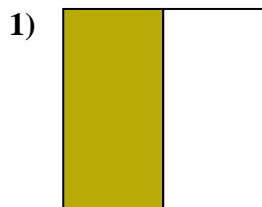


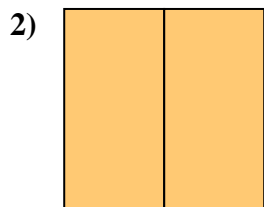


Déterminez quelle lettre représente le mieux la partie colorée de la figure.

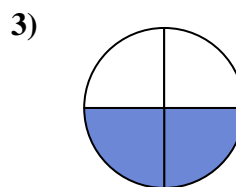
**Réponses**



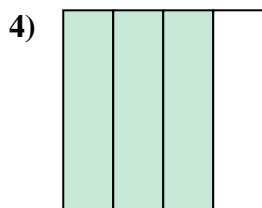
- A. two-fourths  
B. one-half  
C. two-halves



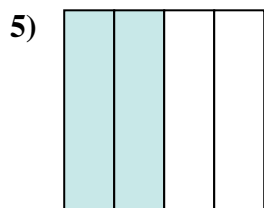
- A. two-halves  
B. three-fourths  
C. three-quarters



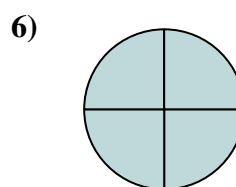
- A. one-quarter  
B. three-fourths  
C. two-quarters



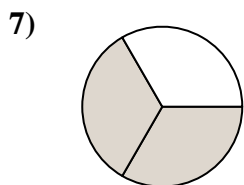
- A. one-fourth  
B. three-quarters  
C. two-fourths



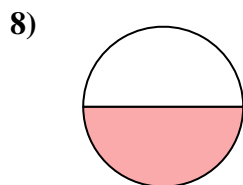
- A. two-quarters  
B. three-fourths  
C. two-halves



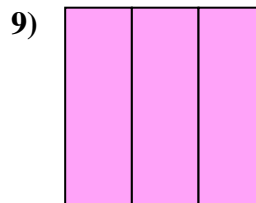
- A. four-quarters  
B. two-halves  
C. two-fourths



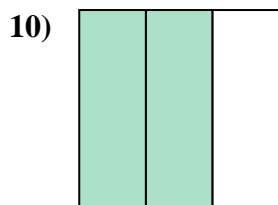
- A. one-quarter  
B. two-halves  
C. two-thirds



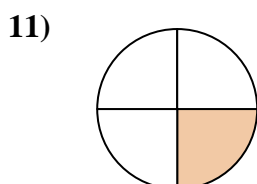
- A. three-fourths  
B. two-halves  
C. one-half



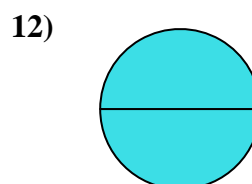
- A. one-half  
B. three-thirds  
C. four-quarters



- A. two-halves  
B. two-thirds  
C. three-fourths



- A. four-quarters  
B. three-fourths  
C. one-quarter



- A. two-halves  
B. one-quarter  
C. one-half

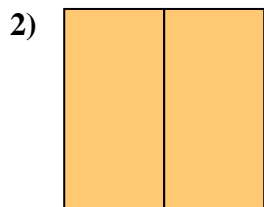
1. \_\_\_\_\_  
2. \_\_\_\_\_  
3. \_\_\_\_\_  
4. \_\_\_\_\_  
5. \_\_\_\_\_  
6. \_\_\_\_\_  
7. \_\_\_\_\_  
8. \_\_\_\_\_  
9. \_\_\_\_\_  
10. \_\_\_\_\_  
11. \_\_\_\_\_  
12. \_\_\_\_\_



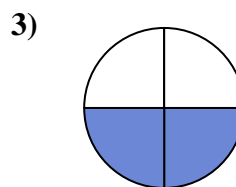
Déterminez quelle lettre représente le mieux la partie colorée de la figure.

**Réponses**

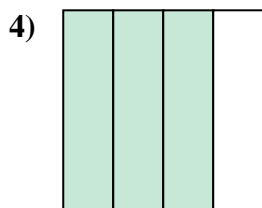
- A. two-fourths  
B. one-half  
C. two-halves



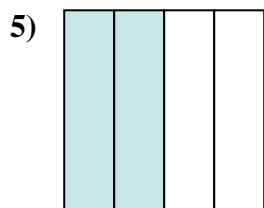
- A. two-halves  
B. three-fourths  
C. three-quarters



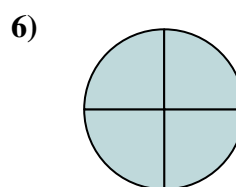
- A. one-quarter  
B. three-fourths  
C. two-quarters



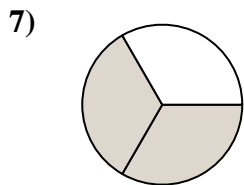
- A. one-fourth  
B. three-quarters  
C. two-fourths



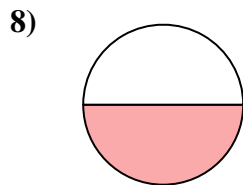
- A. two-quarters  
B. three-fourths  
C. two-halves



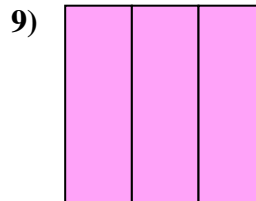
- A. four-quarters  
B. two-halves  
C. two-fourths



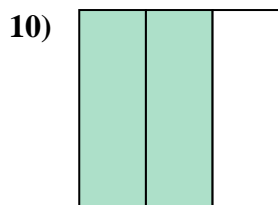
- A. one-quarter  
B. two-halves  
C. two-thirds



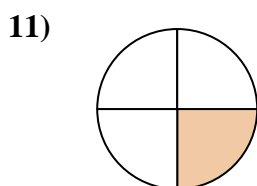
- A. three-fourths  
B. two-halves  
C. one-half



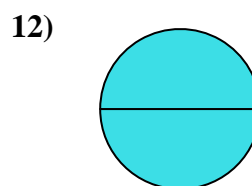
- A. one-half  
B. three-thirds  
C. four-quarters



- A. two-halves  
B. two-thirds  
C. three-fourths



- A. four-quarters  
B. three-fourths  
C. one-quarter



- A. two-halves  
B. one-quarter  
C. one-half

1. **B**  
2. **A**  
3. **C**  
4. **B**  
5. **A**  
6. **A**  
7. **C**  
8. **C**  
9. **B**  
10. **B**  
11. **C**  
12. **A**