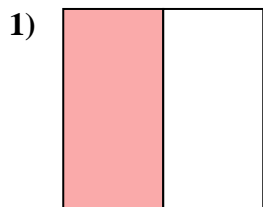


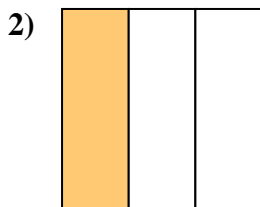


Déterminez quelle lettre représente le mieux la partie colorée de la figure.

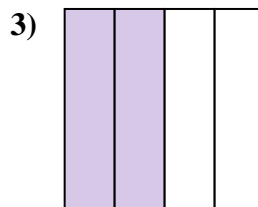
Réponses



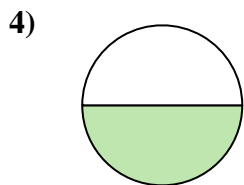
- A. one-half
B. one-quarter
C. two-quarters



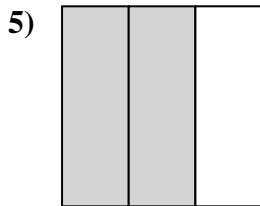
- A. one-fourth
B. one-third
C. two-halves



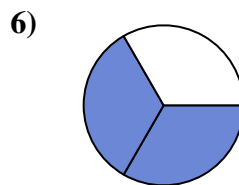
- A. two-halves
B. two-quarters
C. three-fourths



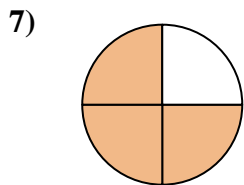
- A. one-half
B. four-quarters
C. three-fourths



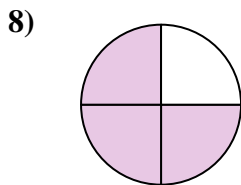
- A. two-thirds
B. two-quarters
C. four-quarters



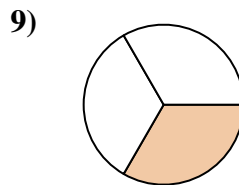
- A. two-thirds
B. two-halves
C. one-quarter



- A. three-fourths
B. one-quarter
C. three-fourths



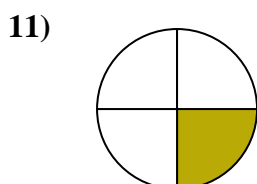
- A. three-quarters
B. two-halves
C. four-quarters



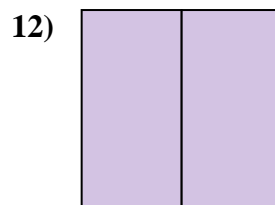
- A. one-third
B. two-fourths
C. three-fourths



- A. one-quarter
B. three-thirds
C. two-quarters



- A. one-fourth
B. three-fourths
C. two-halves



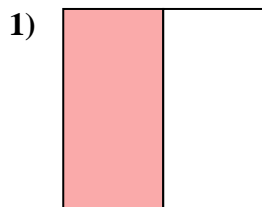
- A. three-quarters
B. two-fourths
C. two-halves

1. _____
2. _____
3. _____
4. _____
5. _____
6. _____
7. _____
8. _____
9. _____
10. _____
11. _____
12. _____

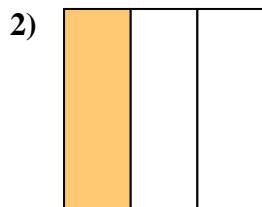


Déterminez quelle lettre représente le mieux la partie colorée de la figure.

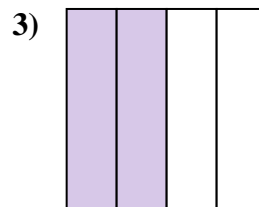
Réponses



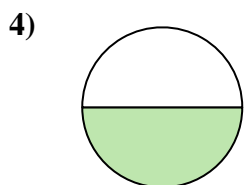
- A. one-half
B. one-quarter
C. two-quarters



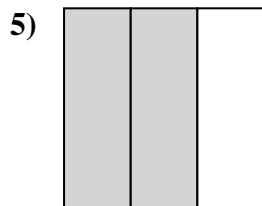
- A. one-fourth
B. one-third
C. two-halves



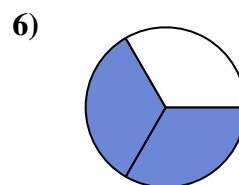
- A. two-halves
B. two-quarters
C. three-fourths



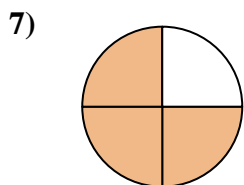
- A. one-half
B. four-quarters
C. three-fourths



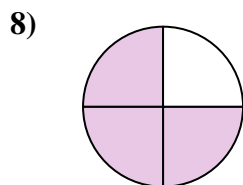
- A. two-thirds
B. two-quarters
C. four-quarters



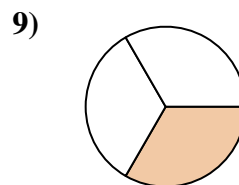
- A. two-thirds
B. two-halves
C. one-quarter



- A. three-fourths
B. one-quarter
C. three-fourths



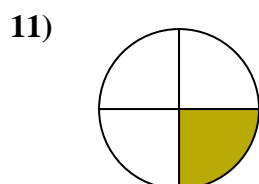
- A. three-quarters
B. two-halves
C. four-quarters



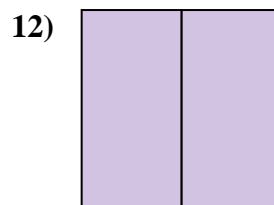
- A. one-third
B. two-fourths
C. three-fourths



- A. one-quarter
B. three-thirds
C. two-quarters



- A. one-fourth
B. three-fourths
C. two-halves



- A. three-quarters
B. two-fourths
C. two-halves

1. **A**

2. **B**

3. **B**

4. **A**

5. **A**

6. **A**

7. **C**

8. **A**

9. **A**

10. **B**

11. **A**

12. **C**