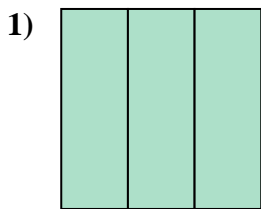


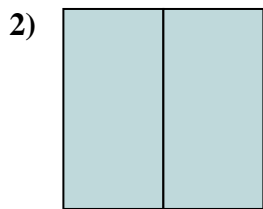


Déterminez quelle lettre représente le mieux la partie colorée de la figure.

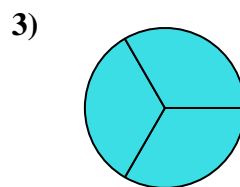
**Réponses**



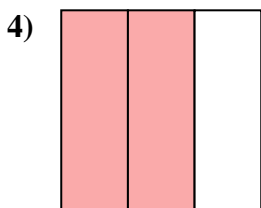
- A. three-quarters  
B. three-thirds  
C. two-halves



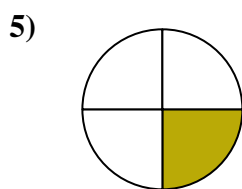
- A. three-fourths  
B. two-halves  
C. two-fourths



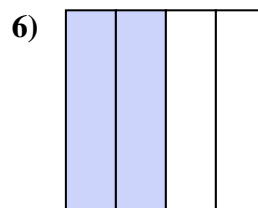
- A. three-fourths  
B. two-quarters  
C. three-thirds



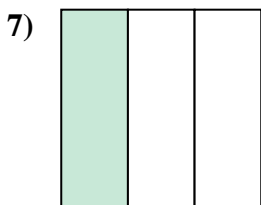
- A. two-thirds  
B. four-quarters  
C. one-fourth



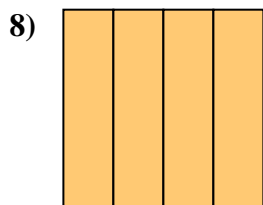
- A. two-fourths  
B. one-quarter  
C. two-halves



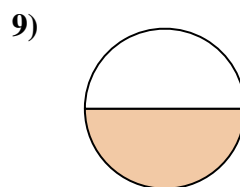
- A. one-quarter  
B. one-half  
C. two-fourths



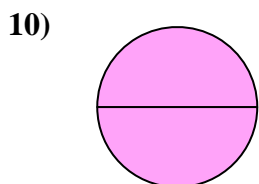
- A. four-quarters  
B. one-third  
C. one-quarter



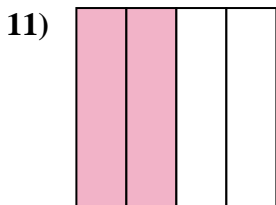
- A. four-quarters  
B. one-half  
C. two-halves



- A. one-fourth  
B. two-halves  
C. one-half



- A. four-quarters  
B. two-halves  
C. three-fourths



- A. two-quarters  
B. one-quarter  
C. three-fourths




- A. three-fourths  
B. one-half  
C. three-quarters

1. \_\_\_\_\_  
2. \_\_\_\_\_  
3. \_\_\_\_\_  
4. \_\_\_\_\_  
5. \_\_\_\_\_  
6. \_\_\_\_\_  
7. \_\_\_\_\_  
8. \_\_\_\_\_  
9. \_\_\_\_\_  
10. \_\_\_\_\_  
11. \_\_\_\_\_  
12. \_\_\_\_\_




Déterminez quelle lettre représente le mieux la partie colorée de la figure.

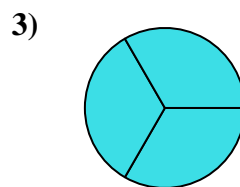
**Réponses**



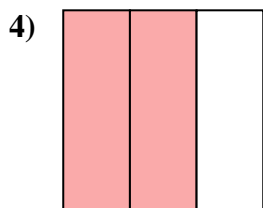
- A. three-quarters  
B. three-thirds  
C. two-halves



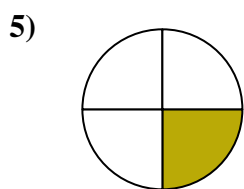
- A. three-fourths  
B. two-halves  
C. two-fourths



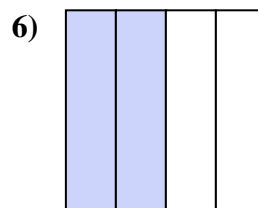
- A. three-fourths  
B. two-quarters  
C. three-thirds



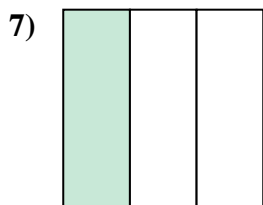
- A. two-thirds  
B. four-quarters  
C. one-fourth



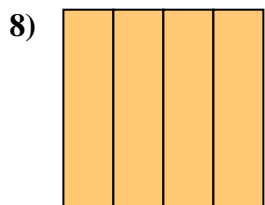
- A. two-fourths  
B. one-quarter  
C. two-halves



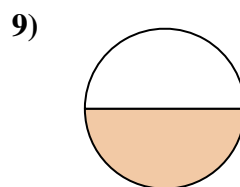
- A. one-quarter  
B. one-half  
C. two-fourths



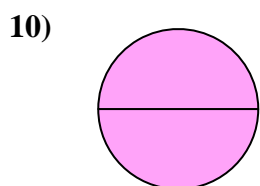
- A. four-quarters  
B. one-third  
C. one-quarter



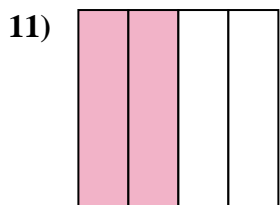
- A. four-quarters  
B. one-half  
C. two-halves



- A. one-fourth  
B. two-halves  
C. one-half



- A. four-quarters  
B. two-halves  
C. three-fourths



- A. two-quarters  
B. one-quarter  
C. three-fourths



- A. three-fourths  
B. one-half  
C. three-quarters

1. **B**

2. **B**

3. **C**

4. **A**

5. **B**

6. **C**

7. **B**

8. **A**

9. **C**

10. **B**

11. **A**

12. **B**