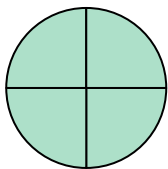




Déterminez quelle lettre représente le mieux la partie colorée de la figure.


**Réponses**

1)



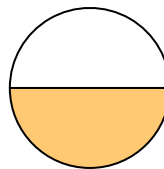
- A. one-fourth  
B. three-fourths  
C. three-fourths

2)




- A. three-quarters  
B. one-quarter  
C. one-half

3)




- A. two-quarters  
B. three-quarters  
C. one-half

4)



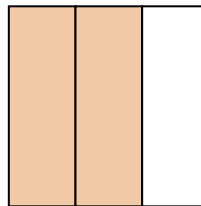
- A. two-halves  
B. one-half  
C. three-thirds

5)



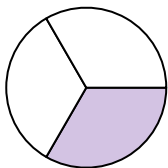
- A. two-halves  
B. one-quarter  
C. two-fourths

6)



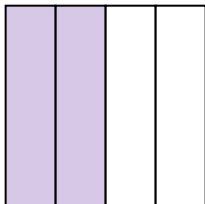
- A. two-thirds  
B. two-halves  
C. one-fourth

7)



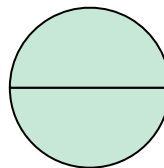
- A. three-fourths  
B. two-halves  
C. one-third

8)



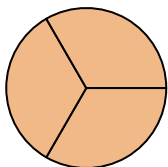
- A. one-half  
B. two-quarters  
C. three-quarters

9)



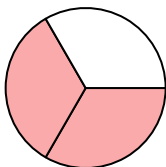
- A. two-quarters  
B. three-fourths  
C. two-halves

10)



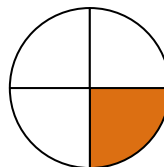
- A. three-thirds  
B. one-fourth  
C. two-halves

11)



- A. one-quarter  
B. two-thirds  
C. four-quarters

12)



- A. one-fourth  
B. three-quarters  
C. two-halves

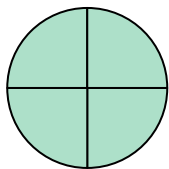
1. \_\_\_\_\_  
2. \_\_\_\_\_  
3. \_\_\_\_\_  
4. \_\_\_\_\_  
5. \_\_\_\_\_  
6. \_\_\_\_\_  
7. \_\_\_\_\_  
8. \_\_\_\_\_  
9. \_\_\_\_\_  
10. \_\_\_\_\_  
11. \_\_\_\_\_  
12. \_\_\_\_\_



Déterminez quelle lettre représente le mieux la partie colorée de la figure.


**Réponses**

1)



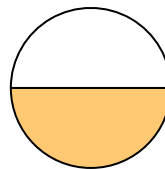
- A. one-fourth  
B. three-fourths  
C. three-fourths

2)




- A. three-quarters  
B. one-quarter  
C. one-half

3)




- A. two-quarters  
B. three-quarters  
C. one-half

4)



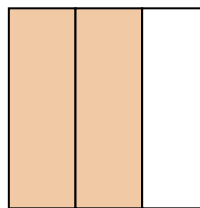
- A. two-halves  
B. one-half  
C. three-thirds

5)



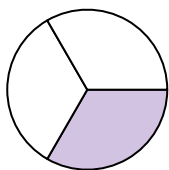
- A. two-halves  
B. one-quarter  
C. two-fourths

6)



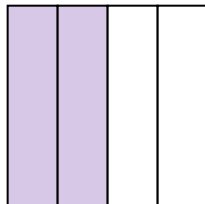
- A. two-thirds  
B. two-halves  
C. one-fourth

7)



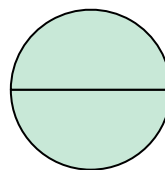
- A. three-fourths  
B. two-halves  
C. one-third

8)



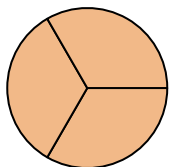
- A. one-half  
B. two-quarters  
C. three-quarters

9)



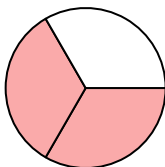
- A. two-quarters  
B. three-fourths  
C. two-halves

10)



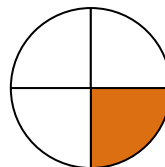
- A. three-thirds  
B. one-fourth  
C. two-halves

11)



- A. one-quarter  
B. two-thirds  
C. four-quarters

12)



- A. one-fourth  
B. three-quarters  
C. two-halves

1. **C**  
2. **C**  
3. **C**  
4. **C**  
5. **A**  
6. **A**  
7. **C**  
8. **B**  
9. **C**  
10. **A**  
11. **B**  
12. **A**