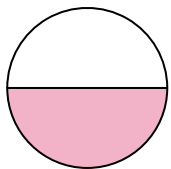




Déterminez quelle lettre représente le mieux la partie colorée de la figure.


Réponses

1)



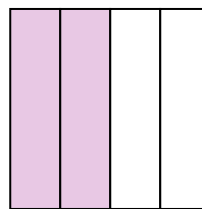
- A. one-half
B. two-halves
C. one-fourth

2)



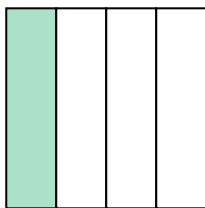
- A. three-fourths
B. one-quarter
C. two-halves

3)



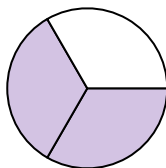
- A. two-quarters
B. one-half
C. three-fourths

4)



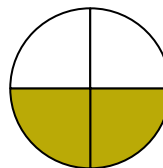
- A. three-fourths
B. one-fourth
C. two-halves

5)



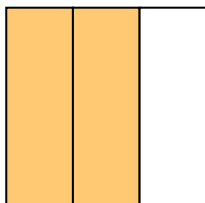
- A. three-fourths
B. two-thirds
C. two-quarters

6)



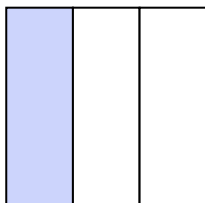
- A. three-fourths
B. two-fourths
C. three-fourths

7)



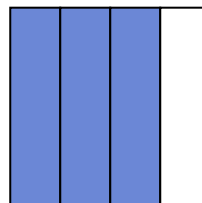
- A. one-quarter
B. four-quarters
C. two-thirds

8)




- A. three-fourths
B. one-third
C. two-halves

9)



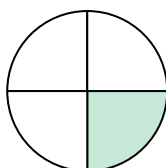
- A. three-fourths
B. three-fourths
C. two-quarters

10)




- A. two-halves
B. one-quarter
C. one-half

11)



- A. three-fourths
B. one-half
C. one-quarter

12)



- A. three-thirds
B. two-halves
C. one-quarter

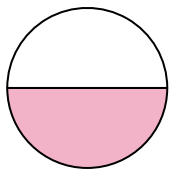
1. _____
2. _____
3. _____
4. _____
5. _____
6. _____
7. _____
8. _____
9. _____
10. _____
11. _____
12. _____



Déterminez quelle lettre représente le mieux la partie colorée de la figure.


Réponses

1)



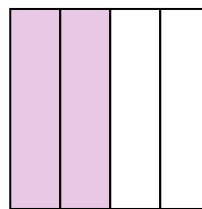
- A. one-half
B. two-halves
C. one-fourth

2)



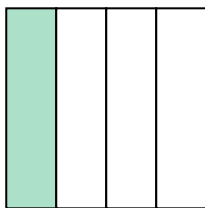
- A. three-fourths
B. one-quarter
C. two-halves

3)



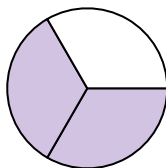
- A. two-quarters
B. one-half
C. three-fourths

4)



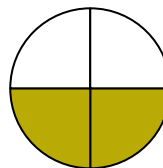
- A. three-fourths
B. one-fourth
C. two-halves

5)



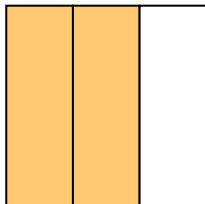
- A. three-fourths
B. two-thirds
C. two-quarters

6)



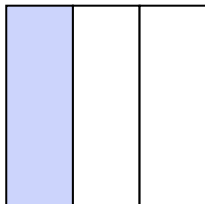
- A. three-fourths
B. two-fourths
C. three-fourths

7)



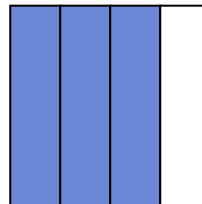
- A. one-quarter
B. four-quarters
C. two-thirds

8)




- A. three-fourths
B. one-third
C. two-halves

9)



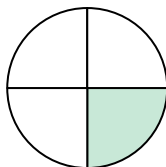
- A. three-fourths
B. three-fourths
C. two-quarters

10)




- A. two-halves
B. one-quarter
C. one-half

11)



- A. three-fourths
B. one-half
C. one-quarter

12)



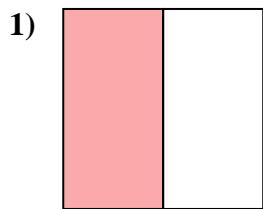
- A. three-thirds
B. two-halves
C. one-quarter

1. **A**
2. **C**
3. **A**
4. **B**
5. **B**
6. **B**
7. **C**
8. **B**
9. **B**
10. **C**
11. **C**
12. **A**

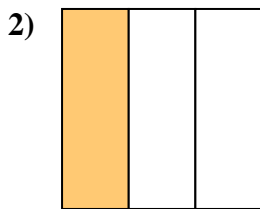


Déterminez quelle lettre représente le mieux la partie colorée de la figure.

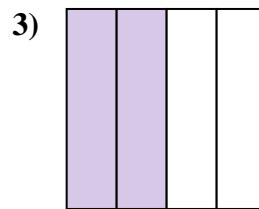
Réponses



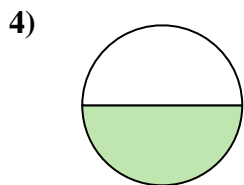
- A. one-half
B. one-quarter
C. two-quarters



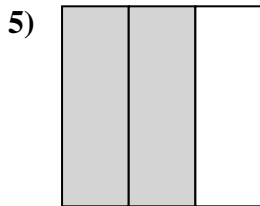
- A. one-fourth
B. one-third
C. two-halves



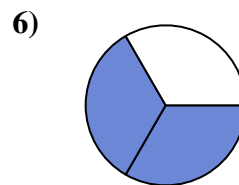
- A. two-halves
B. two-quarters
C. three-fourths



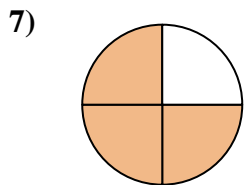
- A. one-half
B. four-quarters
C. three-fourths



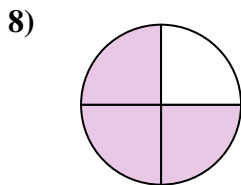
- A. two-thirds
B. two-quarters
C. four-quarters



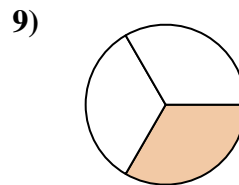
- A. two-thirds
B. two-halves
C. one-quarter



- A. three-fourths
B. one-quarter
C. three-fourths



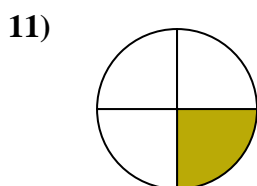
- A. three-quarters
B. two-halves
C. four-quarters



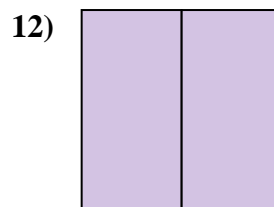
- A. one-third
B. two-fourths
C. three-fourths



- A. one-quarter
B. three-thirds
C. two-quarters



- A. one-fourth
B. three-fourths
C. two-halves

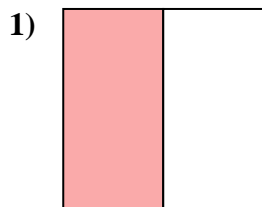


- A. three-quarters
B. two-fourths
C. two-halves

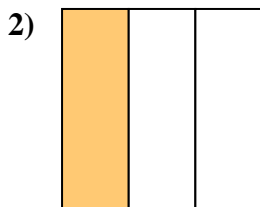
1. _____
2. _____
3. _____
4. _____
5. _____
6. _____
7. _____
8. _____
9. _____
10. _____
11. _____
12. _____



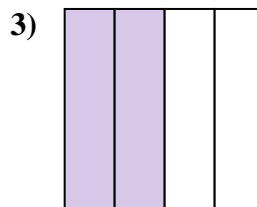
Déterminez quelle lettre représente le mieux la partie colorée de la figure.

Réponses

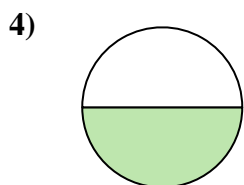
- A. one-half
B. one-quarter
C. two-quarters



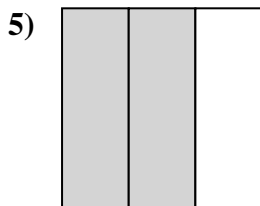
- A. one-fourth
B. one-third
C. two-halves



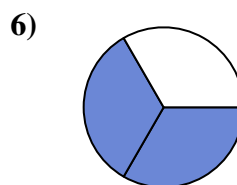
- A. two-halves
B. two-quarters
C. three-fourths



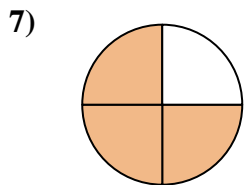
- A. one-half
B. four-quarters
C. three-fourths



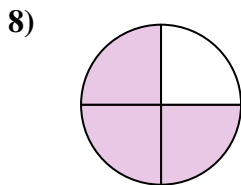
- A. two-thirds
B. two-quarters
C. four-quarters



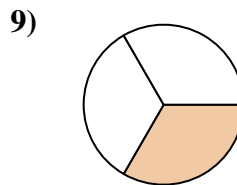
- A. two-thirds
B. two-halves
C. one-quarter



- A. three-fourths
B. one-quarter
C. three-fourths



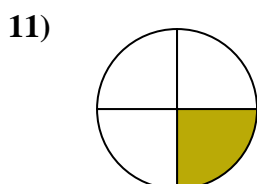
- A. three-quarters
B. two-halves
C. four-quarters



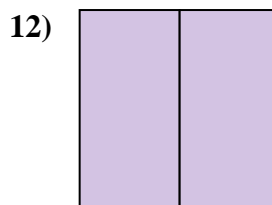
- A. one-third
B. two-fourths
C. three-fourths



- A. one-quarter
B. three-thirds
C. two-quarters

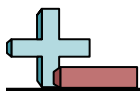


- A. one-fourth
B. three-fourths
C. two-halves



- A. three-quarters
B. two-fourths
C. two-halves

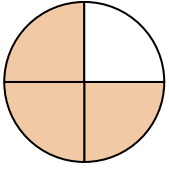
1. **A**2. **B**3. **B**4. **A**5. **A**6. **A**7. **C**8. **A**9. **A**10. **B**11. **A**12. **C**



Déterminez quelle lettre représente le mieux la partie colorée de la figure.

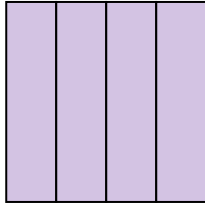
Réponses

1)



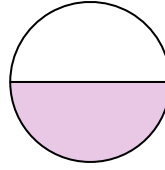
- A. three-fourths
B. two-halves
C. three-fourths

2)



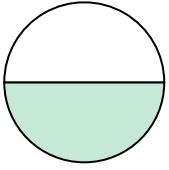
- A. one-half
B. three-fourths
C. one-quarter

3)



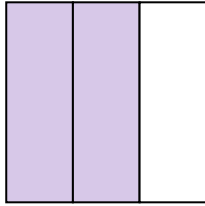
- A. one-half
B. two-halves
C. three-quarters

4)



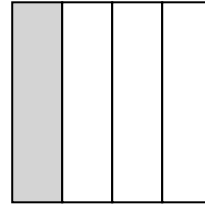
- A. one-half
B. two-fourths
C. two-halves

5)



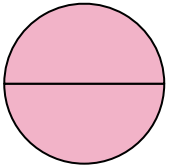
- A. two-quarters
B. one-fourth
C. two-thirds

6)



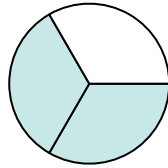
- A. four-quarters
B. two-halves
C. one-quarter

7)



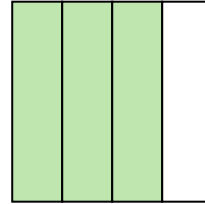
- A. one-fourth
B. two-halves
C. one-half

8)



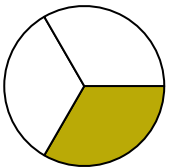
- A. one-half
B. two-halves
C. two-thirds

9)



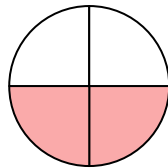
- A. three-fourths
B. two-halves
C. three-fourths

10)



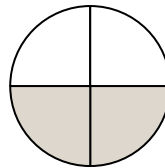
- A. one-fourth
B. one-half
C. one-third

11)



- A. three-fourths
B. one-quarter
C. two-quarters

12)



- A. two-fourths
B. two-halves
C. one-fourth

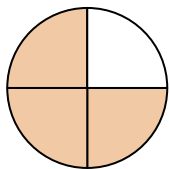
1. _____
2. _____
3. _____
4. _____
5. _____
6. _____
7. _____
8. _____
9. _____
10. _____
11. _____
12. _____



Déterminez quelle lettre représente le mieux la partie colorée de la figure.

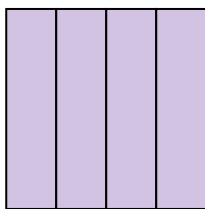
Réponses

1)



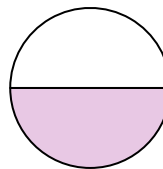
- A. three-fourths
B. two-halves
C. three-fourths

2)



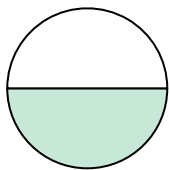
- A. one-half
B. three-fourths
C. one-quarter

3)



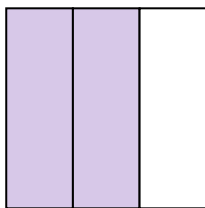
- A. one-half
B. two-halves
C. three-quarters

4)



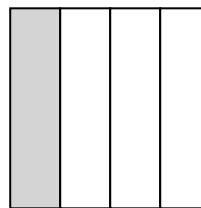
- A. one-half
B. two-fourths
C. two-halves

5)



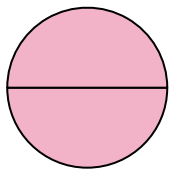
- A. two-quarters
B. one-fourth
C. two-thirds

6)



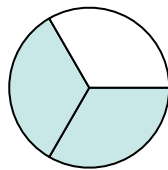
- A. four-quarters
B. two-halves
C. one-quarter

7)



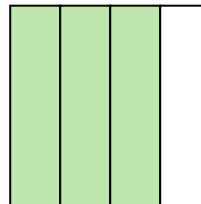
- A. one-fourth
B. two-halves
C. one-half

8)



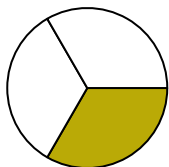
- A. one-half
B. two-halves
C. two-thirds

9)



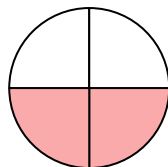
- A. three-fourths
B. two-halves
C. three-fourths

10)



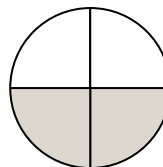
- A. one-fourth
B. one-half
C. one-third

11)



- A. three-fourths
B. one-quarter
C. two-quarters

12)



- A. two-fourths
B. two-halves
C. one-fourth

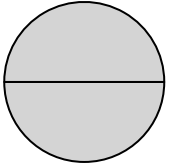
1. **C**
2. **B**
3. **A**
4. **A**
5. **C**
6. **C**
7. **B**
8. **C**
9. **C**
10. **C**
11. **C**
12. **A**



Déterminez quelle lettre représente le mieux la partie colorée de la figure.

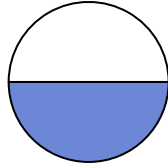
Réponses

1)



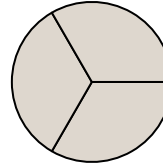
- A. two-halves
B. one-fourth
C. three-fourths

2)




- A. two-halves
B. one-half
C. two-fourths

3)



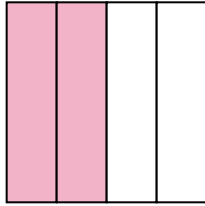
- A. two-fourths
B. three-thirds
C. one-half

4)



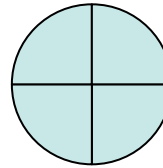
- A. three-thirds
B. four-quarters
C. one-half

5)



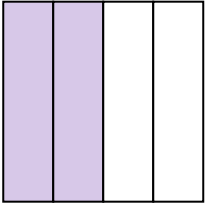
- A. two-fourths
B. one-quarter
C. four-quarters

6)



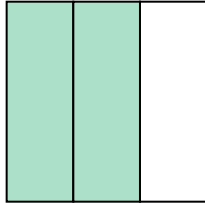
- A. one-fourth
B. two-halves
C. four-quarters

7)



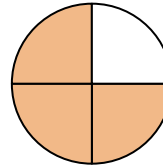
- A. three-fourths
B. two-halves
C. two-quarters

8)




- A. three-quarters
B. two-fourths
C. two-thirds

9)



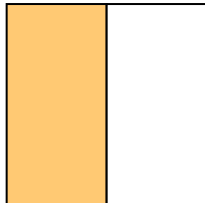
- A. three-fourths
B. two-halves
C. one-quarter

10)



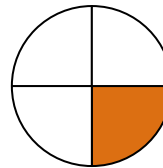
- A. three-fourths
B. two-fourths
C. one-fourth

11)



- A. two-halves
B. one-half
C. three-fourths

12)



- A. two-halves
B. one-half
C. one-fourth

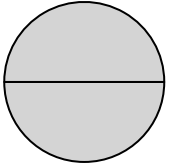
1. _____
2. _____
3. _____
4. _____
5. _____
6. _____
7. _____
8. _____
9. _____
10. _____
11. _____
12. _____



Déterminez quelle lettre représente le mieux la partie colorée de la figure.

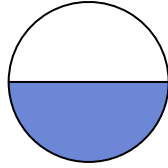
Réponses

1)



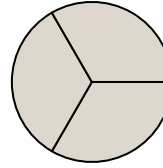
- A. two-halves
B. one-fourth
C. three-fourths

2)




- A. two-halves
B. one-half
C. two-fourths

3)



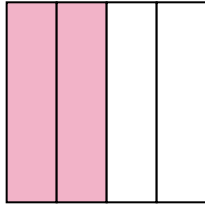
- A. two-fourths
B. three-thirds
C. one-half

4)



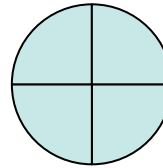
- A. three-thirds
B. four-quarters
C. one-half

5)



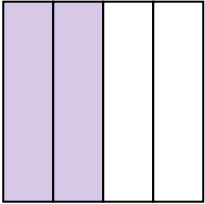
- A. two-fourths
B. one-quarter
C. four-quarters

6)



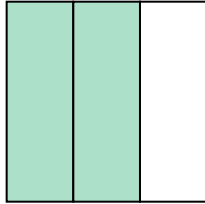
- A. one-fourth
B. two-halves
C. four-quarters

7)



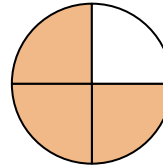
- A. three-fourths
B. two-halves
C. two-quarters

8)




- A. three-quarters
B. two-fourths
C. two-thirds

9)



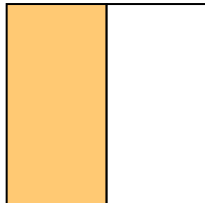
- A. three-fourths
B. two-halves
C. one-quarter

10)



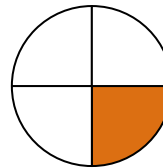
- A. three-fourths
B. two-fourths
C. one-fourth

11)



- A. two-halves
B. one-half
C. three-fourths

12)



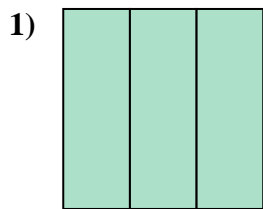
- A. two-halves
B. one-half
C. one-fourth

1. **A**
2. **B**
3. **B**
4. **A**
5. **A**
6. **C**
7. **C**
8. **C**
9. **A**
10. **A**
11. **B**
12. **C**

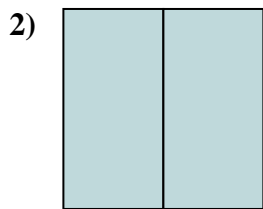


Déterminez quelle lettre représente le mieux la partie colorée de la figure.

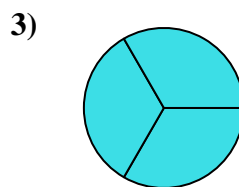
Réponses



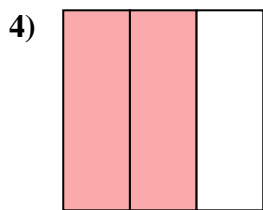
- A. three-quarters
B. three-thirds
C. two-halves



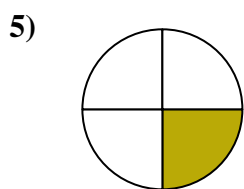
- A. three-fourths
B. two-halves
C. two-fourths



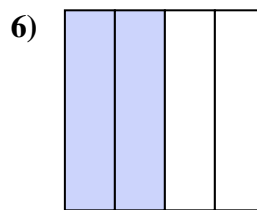
- A. three-fourths
B. two-quarters
C. three-thirds



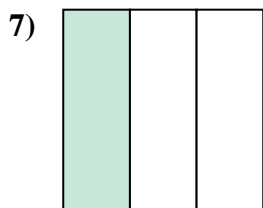
- A. two-thirds
B. four-quarters
C. one-fourth



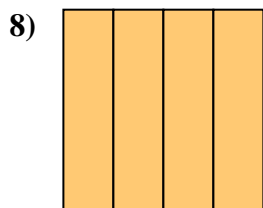
- A. two-fourths
B. one-quarter
C. two-halves



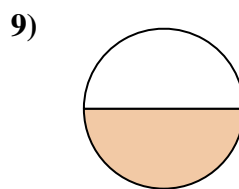
- A. one-quarter
B. one-half
C. two-fourths



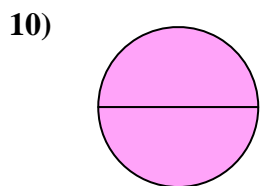
- A. four-quarters
B. one-third
C. one-quarter



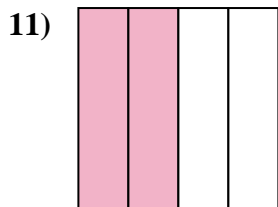
- A. four-quarters
B. one-half
C. two-halves




- A. one-fourth
B. two-halves
C. one-half



- A. four-quarters
B. two-halves
C. three-fourths



- A. two-quarters
B. one-quarter
C. three-fourths



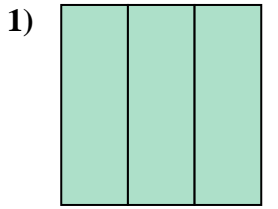
- A. three-fourths
B. one-half
C. three-quarters

1. _____
2. _____
3. _____
4. _____
5. _____
6. _____
7. _____
8. _____
9. _____
10. _____
11. _____
12. _____

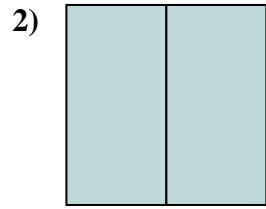


Déterminez quelle lettre représente le mieux la partie colorée de la figure.

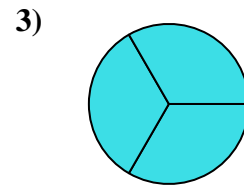
Réponses



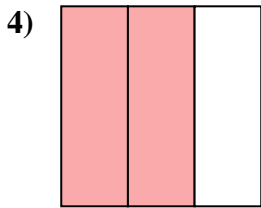
- A. three-quarters
B. three-thirds
C. two-halves



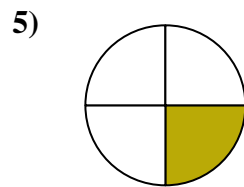
- A. three-fourths
B. two-halves
C. two-fourths



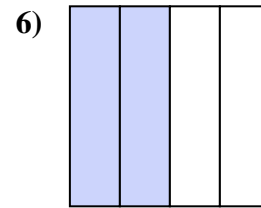
- A. three-fourths
B. two-quarters
C. three-thirds



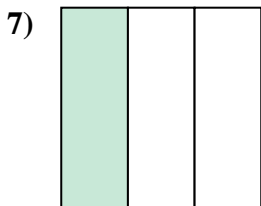
- A. two-thirds
B. four-quarters
C. one-fourth



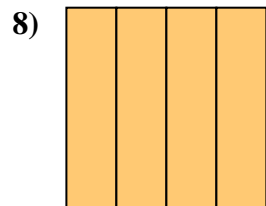
- A. two-fourths
B. one-quarter
C. two-halves



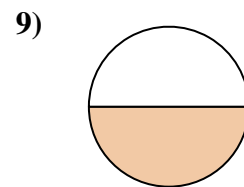
- A. one-quarter
B. one-half
C. two-fourths



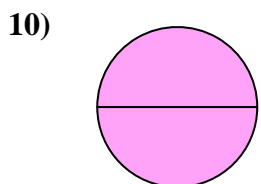
- A. four-quarters
B. one-third
C. one-quarter



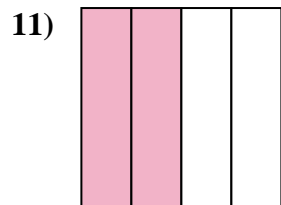
- A. four-quarters
B. one-half
C. two-halves



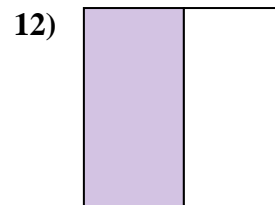
- A. one-fourth
B. two-halves
C. one-half



- A. four-quarters
B. two-halves
C. three-fourths



- A. two-quarters
B. one-quarter
C. three-fourths



- A. three-fourths
B. one-half
C. three-quarters

1. **B**

2. **B**

3. **C**

4. **A**

5. **B**

6. **C**

7. **B**

8. **A**

9. **C**

10. **B**

11. **A**

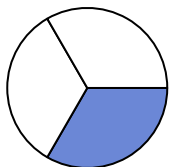
12. **B**



Déterminez quelle lettre représente le mieux la partie colorée de la figure.

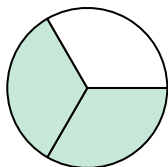
Réponses

1)



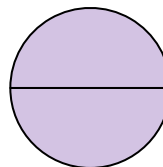
- A. four-quarters
B. one-quarter
C. one-third

2)



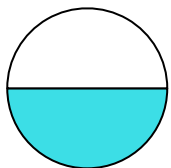
- A. two-thirds
B. one-half
C. one-quarter

3)



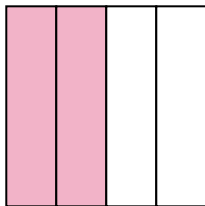
- A. one-fourth
B. two-quarters
C. two-halves

4)



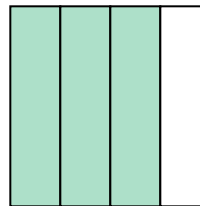
- A. one-half
B. four-quarters
C. three-fourths

5)




- A. four-quarters
B. two-halves
C. two-fourths

6)



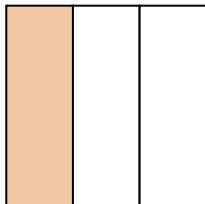
- A. one-fourth
B. four-quarters
C. three-quarters

7)



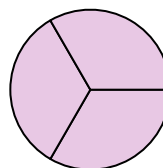
- A. two-fourths
B. two-halves
C. one-half

8)



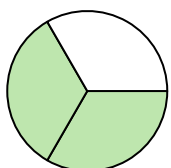
- A. two-fourths
B. one-third
C. three-fourths

9)



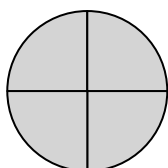
- A. three-thirds
B. one-half
C. three-quarters

10)



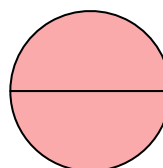
- A. three-fourths
B. two-thirds
C. three-fourths

11)



- A. one-fourth
B. four-quarters
C. one-half

12)



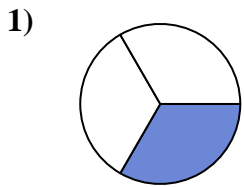
- A. two-halves
B. two-fourths
C. three-fourths

1. _____
2. _____
3. _____
4. _____
5. _____
6. _____
7. _____
8. _____
9. _____
10. _____
11. _____
12. _____

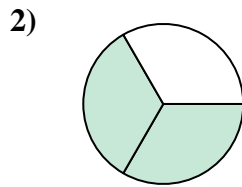


Déterminez quelle lettre représente le mieux la partie colorée de la figure.

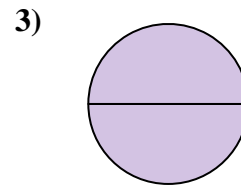
Réponses



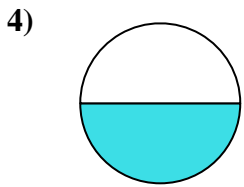
- A. four-quarters
B. one-quarter
C. one-third



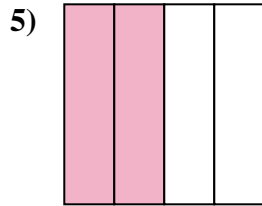
- A. two-thirds
B. one-half
C. one-quarter



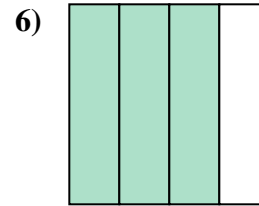
- A. one-fourth
B. two-quarters
C. two-halves



- A. one-half
B. four-quarters
C. three-fourths



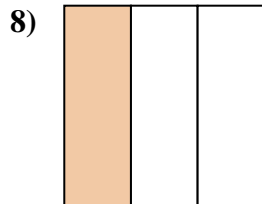
- A. four-quarters
B. two-halves
C. two-fourths



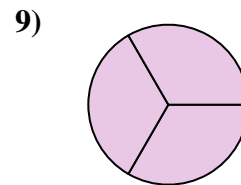
- A. one-fourth
B. four-quarters
C. three-quarters



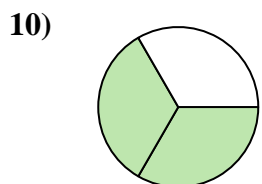
- A. two-fourths
B. two-halves
C. one-half



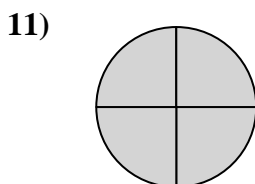
- A. two-fourths
B. one-third
C. three-fourths



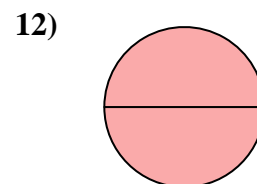
- A. three-thirds
B. one-half
C. three-quarters



- A. three-fourths
B. two-thirds
C. three-fourths



- A. one-fourth
B. four-quarters
C. one-half



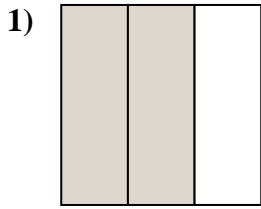
- A. two-halves
B. two-fourths
C. three-fourths

1. **C**
2. **A**
3. **C**
4. **A**
5. **C**
6. **C**
7. **C**
8. **B**
9. **A**
10. **B**
11. **B**
12. **A**

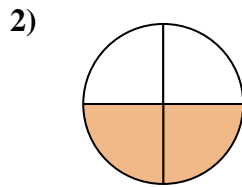


Déterminez quelle lettre représente le mieux la partie colorée de la figure.

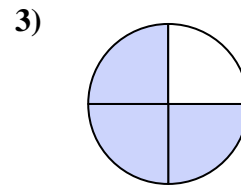
Réponses



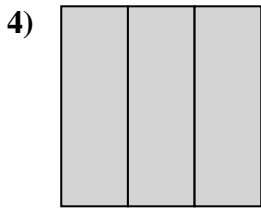
- A. two-thirds
B. two-fourths
C. two-halves



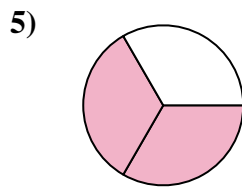
- A. three-fourths
B. two-fourths
C. one-half



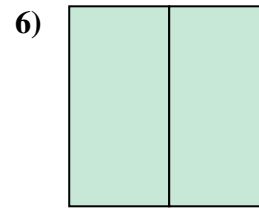
- A. three-fourths
B. four-quarters
C. two-halves



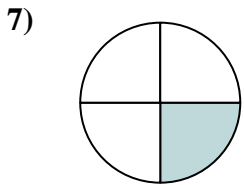
- A. three-thirds
B. one-fourth
C. two-halves



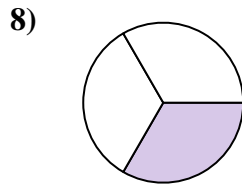
- A. two-halves
B. two-fourths
C. two-thirds



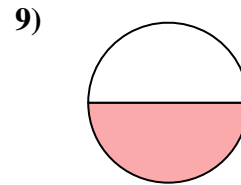
- A. one-fourth
B. two-fourths
C. two-halves



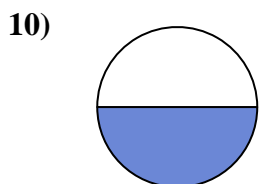
- A. two-halves
B. three-fourths
C. one-fourth



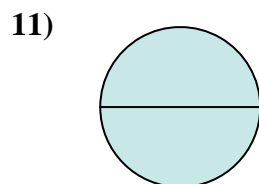
- A. two-halves
B. two-fourths
C. one-third



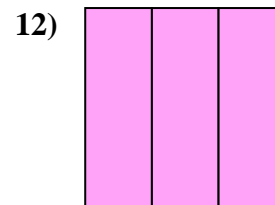
- A. two-halves
B. three-fourths
C. one-half



- A. two-fourths
B. one-fourth
C. one-half



- A. two-halves
B. three-fourths
C. four-quarters



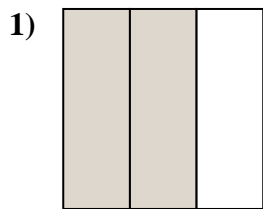
- A. three-thirds
B. one-fourth
C. three-quarters

1. _____
2. _____
3. _____
4. _____
5. _____
6. _____
7. _____
8. _____
9. _____
10. _____
11. _____
12. _____

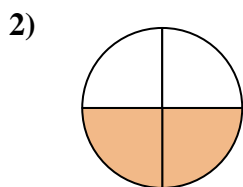


Déterminez quelle lettre représente le mieux la partie colorée de la figure.

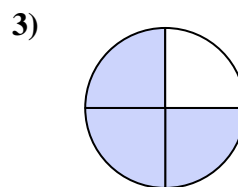
Réponses



- A. two-thirds
B. two-fourths
C. two-halves



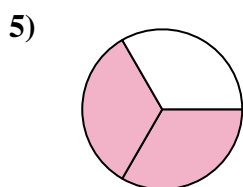
- A. three-fourths
B. two-fourths
C. one-half



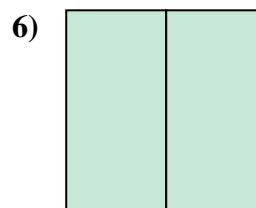
- A. three-fourths
B. four-quarters
C. two-halves



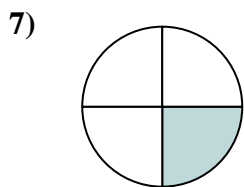
- A. three-thirds
B. one-fourth
C. two-halves



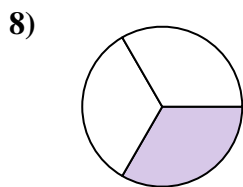
- A. two-halves
B. two-fourths
C. two-thirds



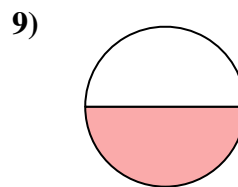
- A. one-fourth
B. two-fourths
C. two-halves



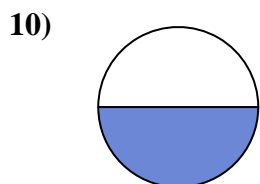
- A. two-halves
B. three-fourths
C. one-fourth



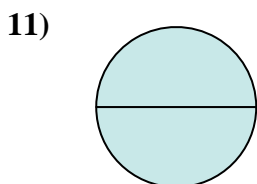
- A. two-halves
B. two-fourths
C. one-third



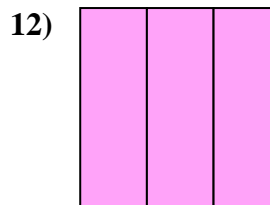
- A. two-halves
B. three-fourths
C. one-half



- A. two-fourths
B. one-fourth
C. one-half



- A. two-halves
B. three-fourths
C. four-quarters



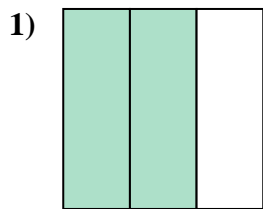
- A. three-thirds
B. one-fourth
C. three-quarters

1. **A**
2. **B**
3. **A**
4. **A**
5. **C**
6. **C**
7. **C**
8. **C**
9. **C**
10. **C**
11. **A**
12. **A**

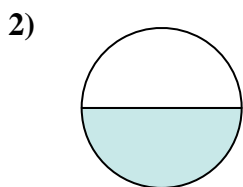


Déterminez quelle lettre représente le mieux la partie colorée de la figure.

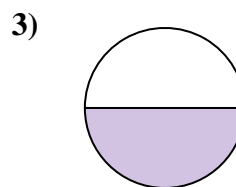
Réponses



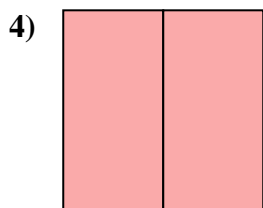
- A. two-halves
B. two-thirds
C. one-quarter



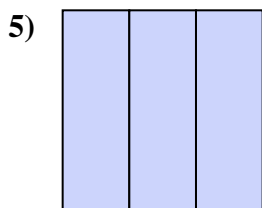
- A. one-fourth
B. two-quarters
C. one-half



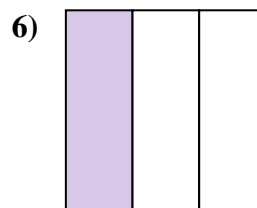
- A. two-fourths
B. one-half
C. two-halves



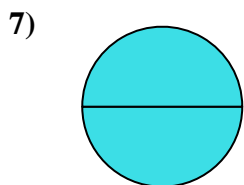
- A. two-halves
B. two-quarters
C. one-half



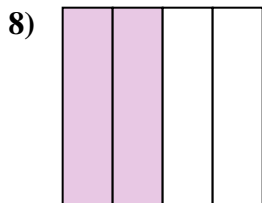
- A. three-fourths
B. three-thirds
C. one-fourth



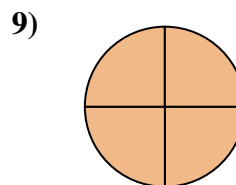
- A. two-halves
B. one-third
C. one-quarter



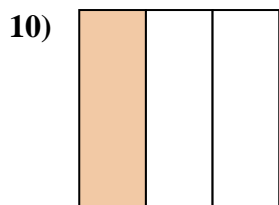
- A. three-fourths
B. one-half
C. two-halves



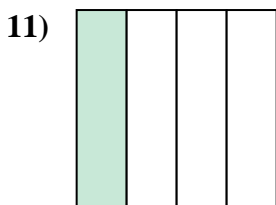
- A. three-quarters
B. two-quarters
C. two-halves



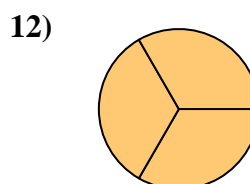
- A. one-half
B. three-fourths
C. two-fourths



- A. one-third
B. one-half
C. two-halves



- A. three-quarters
B. two-halves
C. one-quarter



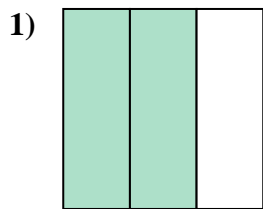
- A. three-thirds
B. two-halves
C. one-half

1. _____
2. _____
3. _____
4. _____
5. _____
6. _____
7. _____
8. _____
9. _____
10. _____
11. _____
12. _____

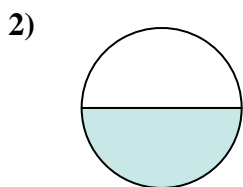


Déterminez quelle lettre représente le mieux la partie colorée de la figure.

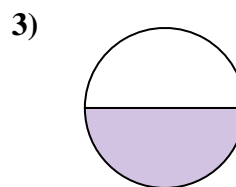
Réponses



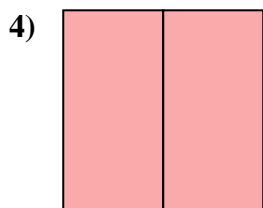
- A. two-halves
B. two-thirds
C. one-quarter



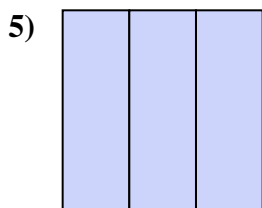
- A. one-fourth
B. two-quarters
C. one-half



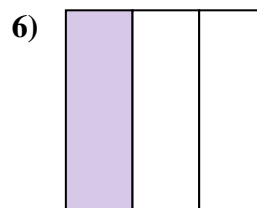
- A. two-fourths
B. one-half
C. two-halves



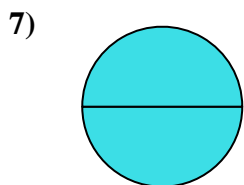
- A. two-halves
B. two-quarters
C. one-half



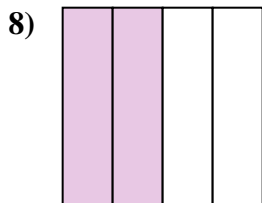
- A. three-fourths
B. three-thirds
C. one-fourth



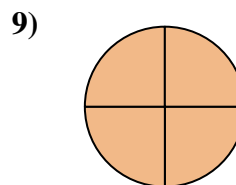
- A. two-halves
B. one-third
C. one-quarter



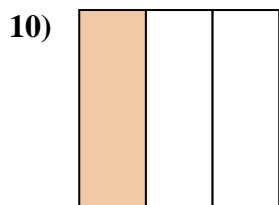
- A. three-fourths
B. one-half
C. two-halves



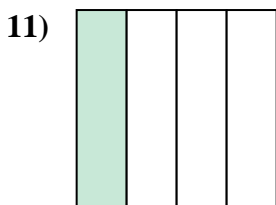
- A. three-quarters
B. two-quarters
C. two-halves



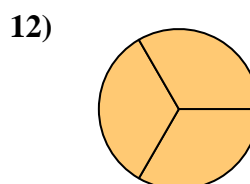
- A. one-half
B. three-fourths
C. two-fourths



- A. one-third
B. one-half
C. two-halves



- A. three-quarters
B. two-halves
C. one-quarter



- A. three-thirds
B. two-halves
C. one-half

1. **B**

2. **C**

3. **B**

4. **A**

5. **B**

6. **B**

7. **C**

8. **B**

9. **B**

10. **A**

11. **C**

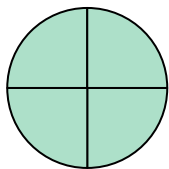
12. **A**



Déterminez quelle lettre représente le mieux la partie colorée de la figure.


Réponses

1)



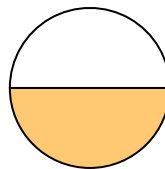
- A. one-fourth
B. three-fourths
C. three-fourths

2)




- A. three-quarters
B. one-quarter
C. one-half

3)




- A. two-quarters
B. three-quarters
C. one-half

4)



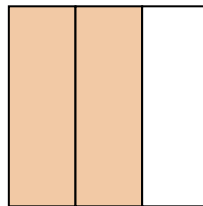
- A. two-halves
B. one-half
C. three-thirds

5)



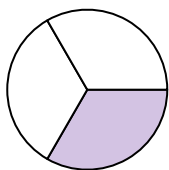
- A. two-halves
B. one-quarter
C. two-fourths

6)



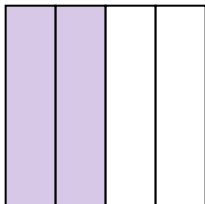
- A. two-thirds
B. two-halves
C. one-fourth

7)



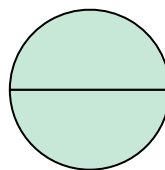
- A. three-fourths
B. two-halves
C. one-third

8)



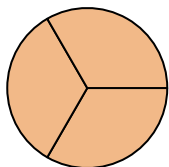
- A. one-half
B. two-quarters
C. three-quarters

9)



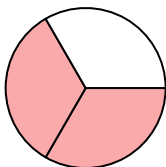
- A. two-quarters
B. three-fourths
C. two-halves

10)



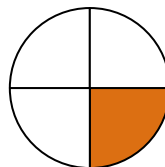
- A. three-thirds
B. one-fourth
C. two-halves

11)



- A. one-quarter
B. two-thirds
C. four-quarters

12)



- A. one-fourth
B. three-quarters
C. two-halves

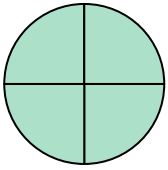
1. _____
2. _____
3. _____
4. _____
5. _____
6. _____
7. _____
8. _____
9. _____
10. _____
11. _____
12. _____



Déterminez quelle lettre représente le mieux la partie colorée de la figure.


Réponses

1)



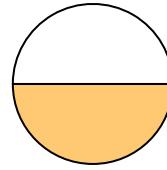
- A. one-fourth
B. three-fourths
C. three-fourths

2)




- A. three-quarters
B. one-quarter
C. one-half

3)



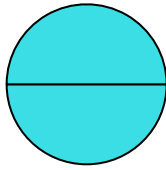
- A. two-quarters
B. three-quarters
C. one-half

4)



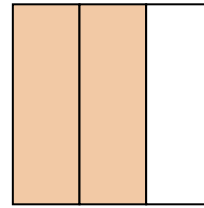
- A. two-halves
B. one-half
C. three-thirds

5)



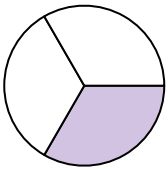
- A. two-halves
B. one-quarter
C. two-fourths

6)



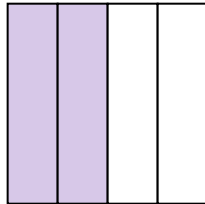
- A. two-thirds
B. two-halves
C. one-fourth

7)



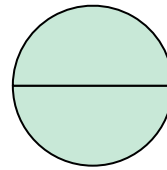
- A. three-fourths
B. two-halves
C. one-third

8)



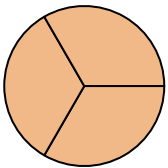
- A. one-half
B. two-quarters
C. three-quarters

9)



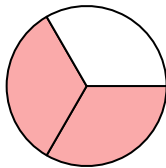
- A. two-quarters
B. three-fourths
C. two-halves

10)



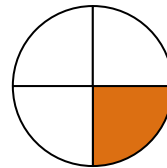
- A. three-thirds
B. one-fourth
C. two-halves

11)



- A. one-quarter
B. two-thirds
C. four-quarters

12)



- A. one-fourth
B. three-quarters
C. two-halves

1. **C**
2. **C**
3. **C**
4. **C**
5. **A**
6. **A**
7. **C**
8. **B**
9. **C**
10. **A**
11. **B**
12. **A**

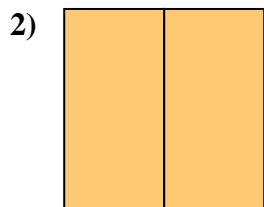


Déterminez quelle lettre représente le mieux la partie colorée de la figure.

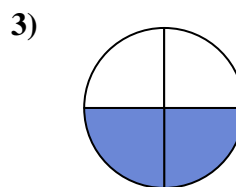
Réponses



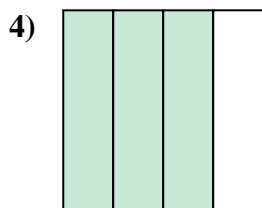
- A. two-fourths
B. one-half
C. two-halves



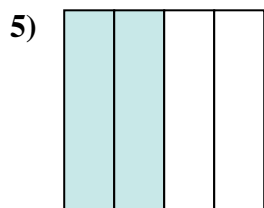
- A. two-halves
B. three-fourths
C. three-quarters



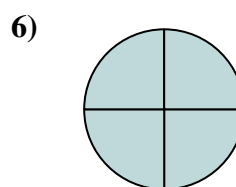
- A. one-quarter
B. three-fourths
C. two-quarters



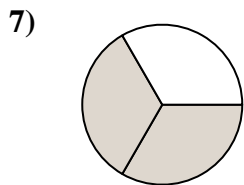
- A. one-fourth
B. three-quarters
C. two-fourths



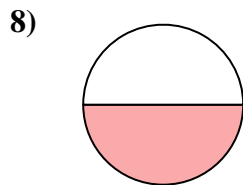
- A. two-quarters
B. three-fourths
C. two-halves



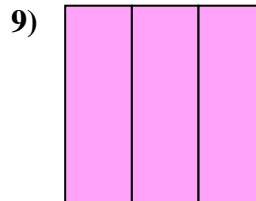
- A. four-quarters
B. two-halves
C. two-fourths



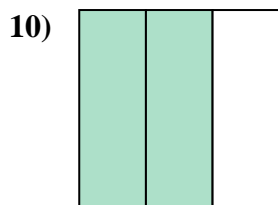
- A. one-quarter
B. two-halves
C. two-thirds



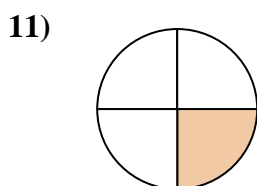
- A. three-fourths
B. two-halves
C. one-half



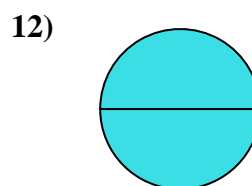
- A. one-half
B. three-thirds
C. four-quarters



- A. two-halves
B. two-thirds
C. three-fourths



- A. four-quarters
B. three-fourths
C. one-quarter



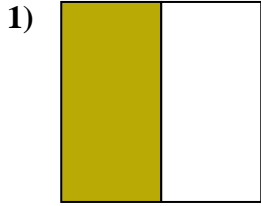
- A. two-halves
B. one-quarter
C. one-half

1. _____
2. _____
3. _____
4. _____
5. _____
6. _____
7. _____
8. _____
9. _____
10. _____
11. _____
12. _____

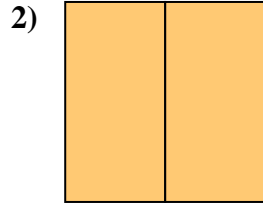


Déterminez quelle lettre représente le mieux la partie colorée de la figure.

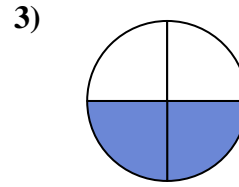
Réponses



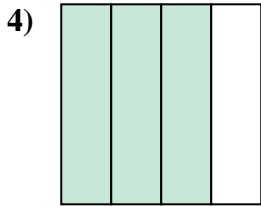
- A. two-fourths
B. one-half
C. two-halves



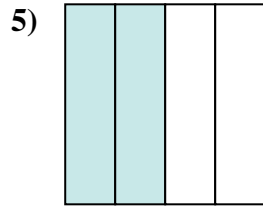
- A. two-halves
B. three-fourths
C. three-quarters



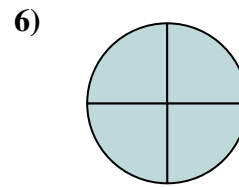
- A. one-quarter
B. three-fourths
C. two-quarters



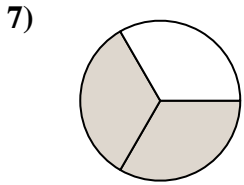
- A. one-fourth
B. three-quarters
C. two-fourths



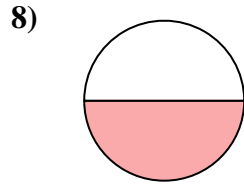
- A. two-quarters
B. three-fourths
C. two-halves



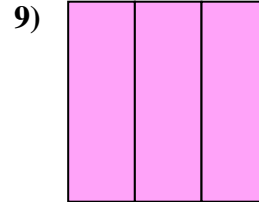
- A. four-quarters
B. two-halves
C. two-fourths



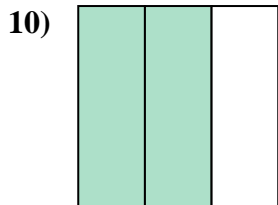
- A. one-quarter
B. two-halves
C. two-thirds



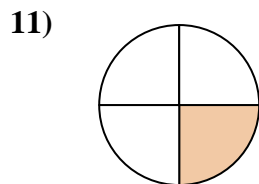
- A. three-fourths
B. two-halves
C. one-half



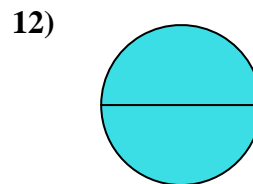
- A. one-half
B. three-thirds
C. four-quarters



- A. two-halves
B. two-thirds
C. three-fourths



- A. four-quarters
B. three-fourths
C. one-quarter



- A. two-halves
B. one-quarter
C. one-half

1. **B**
2. **A**
3. **C**
4. **B**
5. **A**
6. **A**
7. **C**
8. **C**
9. **B**
10. **B**
11. **C**
12. **A**