



Avec les droites numériques arrondir chaque nombre à la centaine la plus proche.

Réponses

Ex)

96 497



Ex.

96 500

1)

9 868



1. _____

2)

57 884



2. _____

3)

382



3. _____

4)

33 251



4. _____

5)

7 146



5. _____

6)

1 986



6. _____

7)

751



7. _____

8)

29 013



8. _____

9)

390



9. _____

10)

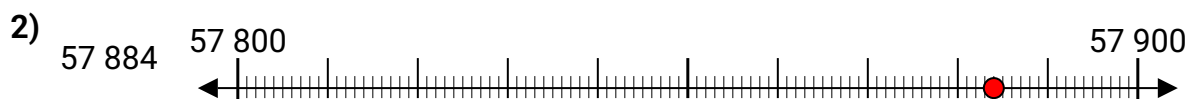
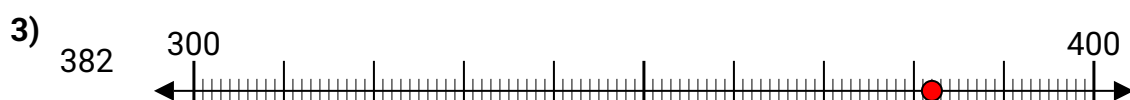

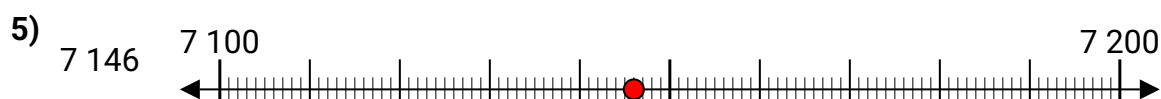
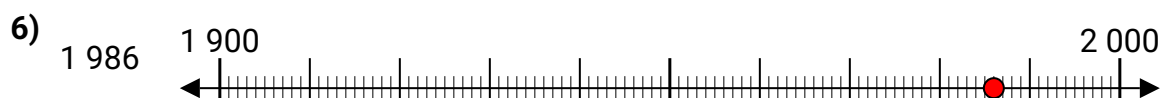
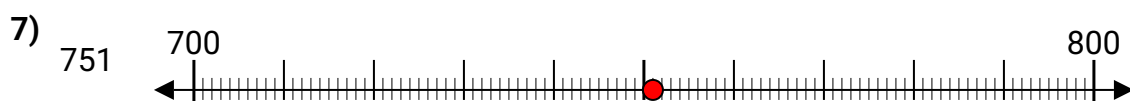

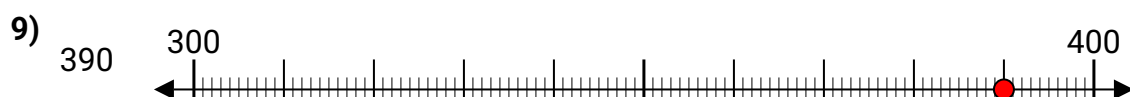
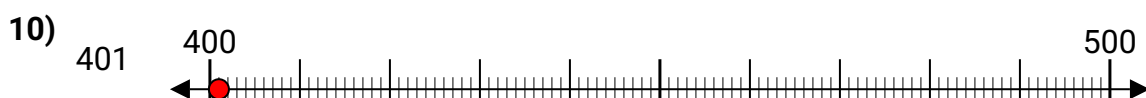
401



10. _____



Avec les droites numériques arrondir chaque nombre à la centaine la plus proche.

RéponsesEx. **96 500**1. **9 900**2. **57 900**3. **400**4. **33 300**5. **7 100**6. **2 000**7. **800**8. **29 000**9. **400**10. **400**